

ONE VISION EXAMINATIONS CENTRE (OVEC)



(A Credible Private Examinations Group)

END OF FIRST TERM EXAMINATION - DEC.

ENGLISH LANGUAGE

1 hour 40 minutes

| | | | |
|----------------------|--|---------------------|--------------|
| NAME OF PUPIL | | | |
| SIGNATURE | | Question no. | Marks |
| CLASS | BASIC 3 | | |
| INSTRUCTIONS | 1. Write your name and indicate your signature in the spaces provided above. | | |
| | 2. Answer the questions as stated by the instructions given before each section. | | |
| | 3. Your teacher will guide you to understand the questions before you start. | | |
| | TOTAL | | |

From the options lettered A to C, choose the right action words to complete the sentences.

1. The little girl her books.
A. is reading
B. are reading
C. have read
2. Yesterday, Gina fish.
A. is frying
B. was frying
C. are frying
3. Those deer the grass.
A. is chewing
B. are chewing
C. was chewing
4. She away from us.
A. is running
B. were running
C. have ran
5. The children for more food.
A. was asking
B. is asking
C. were asking
6. We a lot of mistakes.
A. was making
B. are making
C. has made
7. The sun well.
A. have scorched
B. is scorching
C. were scorching

From the options lettered A to C, select the action word that suits each sentence.

8. Her cat always from the soup.
A. steal
B. steals
C. are stealing
9. They the boxes in the morning.
A. packs
B. park
C. pack
10. The traders many people every day.
A. welcome
B. welcomes
C. has welcomed
11. Many people in the river.
A. wash
B. washes
C. is washing
12. She everything she sees.
A. spoil
B. were spoiling
C. spoils
13. On Sundays, he to church.
A. goes
B. go
C. gone

14. The lawyers to the court yesterday.
A. walk
B. walks
C. walked

From the options lettered A to C, choose the word that rhymes with the underlined word in each sentence.

15. The broom looks too old.
A. road
B. board
C. room
16. He drove through the other lane.
A. pain
B. land
C. lead

17. It looked like a mouse.
A. louse
B. hat
C. mass

18. He bought a piece of cloth.
A. pack
B. peace
C. pie

19. The dark is near.
A. deck
B. drop
C. Duck

20. He put it on the wall.
A. cut
B. but
C. took

SECTION B

Answer **all** questions.

Rewrite and capitalize the first letter of each word in the text titles.

1. the hawk and the hen.

2. the greedy hyena.

3. the fisherman and his wife.

4. ananse and the pot of wisdom.

5. how the rainbow was made.

Use a comma, apostrophe or full stop where necessary.

6. I saw John mother today.

7. The little girl has a book an eraser a pencil and a bag.

8. My friend car is not new.

9. Mrs Dora is a nurse

10. He said that G K Osei is our new teacher.

SECTION C

Read the passage below carefully and answer the questions that follow.

Ama wakes up early each morning to help her grandmother sweep their compound in a small town near Cape Coast. One day, she noticed many dry leaves under their mango tree. Her grandmother explained that the hot weather had dried the tree. They fetched water from the tank and watered it. After some days, new green leaves appeared, and Ama felt proud for helping the tree grow well. The neighbours also admired how fresh the tree looked. Ama's grandmother thanked her for being hardworking. Ama decided to continue helping so their home would always look neat and beautiful.

a. Why does Ama wake up early each morning?

b. What did Ama notice under the mango tree one day?

c. How did Ama and her grandmother help the mango tree?

d. Why did the neighbours admire the tree?

ONE VISION EXAMINATIONS CENTRE (OVEC)



(A Credible Private Examinations Group)

END OF FIRST TERM EXAMINATION - DEC.

MATHEMATICS

1 hour 40 minutes

| | | | |
|----------------------|--|---------------------|--------------|
| NAME OF PUPIL | | | |
| SIGNATURE | | Question no. | Marks |
| CLASS | BASIC 3 | | |
| INSTRUCTIONS | 1. Write your name and indicate your signature in the spaces provided above. | | |
| | 2. Answer the questions as stated by the instructions given before each section. | | |
| | 3. Your teacher will guide you to understand the questions before you start. | | |
| | TOTAL | | |

Read each question carefully and choose the correct option from lettered A, B and C.

- If one pencil costs 60 pesewas. How much will Jerry pay for 4 pencils?
 - GH¢ 2.00
 - GH¢ 2.20
 - GH¢ 2.40

- Count and select the number of sides.




- 3
 - 4
 - 5
- The numbers 25, 55, 85, 120, 150 show skipping
 - forward in 30s
 - forward in 40s
 - backwards in 30s

- How many faces does a half orange have?
 - 2
 - 3
 - 4

- What is the place value of the underlined digit? 7923
 - Tens
 - Hundreds
 - Thousands

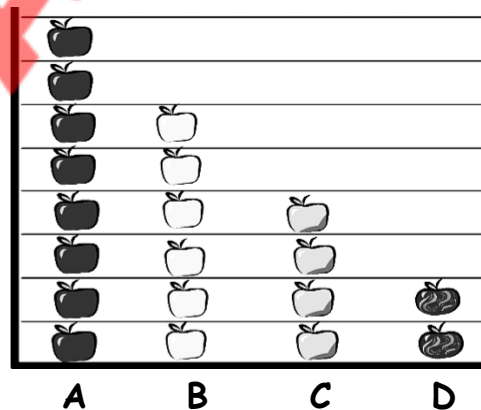
- Which of the following shows skipping backwards in 5s?
 - 29, 24, 19, 14
 - 25, 21, 18, 15
 - 32, 28, 22, 20

Use the 3D shape below to answer questions 7 and 8.



- A property of the object is
 - straight side
 - rough face
 - curved surface
- The 3D shape is similar to a
 - sardine tin
 - chalk piece
 - football
- Four groups of three mangoes will make
 - 9 mangoes
 - 10 mangoes
 - 12 mangoes

The picture graph below shows the fruits Kofi ate in a week. Use it to answer questions 10 to 14.



- The most eaten fruit is
 - C
 - B
 - A
- How many fruits did he take in all?
 - 21
 - 20
 - 19
- How many of fruits **A** and **B** did he take?
 - 12
 - 13
 - 14

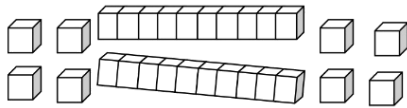
13. How much did he pay for all fruit **C** if one costs 50 pesewas?

- A. GH¢ 2.00
- B. GH¢ 1.50
- C. GH¢ 2.50

14. What is the least eaten fruit?

- A. Fruit B
- B. Fruit D
- C. Fruit C

15. Count and select the number of blocks.



- A. 26
- B. 27
- C. 28

16. The outline of stars below shows



- A. 3×1
- B. 2×3
- C. 2×2

17. Write the number **six thousand, two hundred and forty-eight** using words?

- A. 6248
- B. 6284
- C. 6246

18. Find the missing number $289 = 200 + \underline{\hspace{2cm}} + 9$.

- A. 800
- B. 80
- C. 8

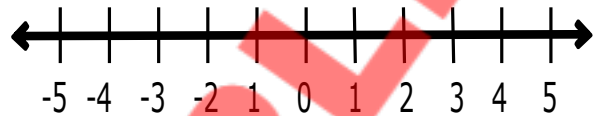
19. A ruler costs GH¢1.50. How much is paid for two rulers?

- A. GH¢ 3.00
- B. GH¢ 4.00
- C. GH¢ 3.50

20. The number 985 is more than

- A. 990
- B. 987
- C. 958

Use the number line below to answer questions 21 to 23.



21. Which number is at the centre?

- A. -2
- B. 3
- C. 0


22. How many moves will be made from -1 to 4?

- A. 4
- B. 5
- C. 6

23. Select the smallest number on the number line.

- A. -5
- B. 0
- C. -1

24. Count and select the number of squares.



- A. 24
- B. 23
- C. 22

25. The rule for the pattern given is 18, 15, 12, 9, 6, ...

- A. Add 3
- B. Subtract 3
- C. Divide 3

SECTION B

[25 MARKS]

Answer **all** questions.

1. If a girl buys 4 of each of the following items, write the amount she would pay in the box.

(a) Book = GH¢ 2.50



(b) Sharpener = 80 pesewas



(c) Pen = GH¢ 1.50



2. Write the numbers in figures on the line.

(a) Six thousand, three hundred and thirteen = _____

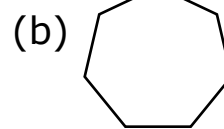
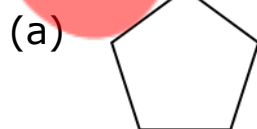
(b) Eight thousand, and seventeen. = _____

3. Continue the following patterns by adding the next two numbers.

(a) 1, 4, 7, 10, 13, _____

(b) 20, 18, 16, 14, _____

4. Count and write the number of sides.



5. What is the place value of 4 in the number 4568?

ONE VISION EXAMINATIONS CENTRE (OVEC)



END OF FIRST TERM EXAMINATION - DEC.

SCIENCE

1 hour 40 minutes

BASIC 3

PRINT IN BLOCK LETTERS

Name: _____
Surname Other Names

Date: _____ **Signature:** _____

OBJECTIVE TEST

Answer **all** Questions in this section

- The part of a plant that is found in the soil is
A. stem
B. leaf
C. root
- The ability of metals to be beaten into different shapes is called
A. lustre
B. malleability
C. conductivity
- The part of the human body which protects the intestine is the
A. abdomen
B. legs
C. chest
- A moving air is called
A. storm
B. wind
C. weather
- Animals obtain oxygen from
A. humans
B. green plants
C. water
- An example of a liquid is
A. wood
B. air
C. blood
- How many seasons do we have in Ghana?
A. 1
B. 2
C. 3

8. Which of the following materials is used to make jewelry?

- A. Mercury
- B. Plastic
- C. Gold

9. When a solid substance changes into a liquid, this process is called

- A. freezing
- B. condensation
- C. melting

10. The largest and brightest heavenly body is the

- A. moon
- B. satellite
- C. sun

11. The name given to a young, developing seed is called

- A. pollination
- B. seedling
- C. germination

12. The part of the human body used to see at night is

- A. neck
- B. hands
- C. eyes

13. How many types of germination do we have?

- A. 1
- B. 2
- C. 3

14. All the following materials can be found in a car except

- A. wood
- B. plastic
- C. fabric

15. A material used to make an electric wire is

- A. plastic
- B. steel
- C. copper

16. A mixture of sugar and water can best be separated by

- A. sublimation
- B. decantation
- C. evaporation

17. The life process whereby living things move with the whole body from one place to another is called

- A. movement
- B. reproduction
- C. locomotion

18. All the following are activities in the dry season except

- A. plant leaves become dry
- B. there is dust in the air
- C. it rains frequently

19. The following are examples of non-metals except

- A. wood
- B. cotton
- C. mercury

20. Which of the following activities is done at night?

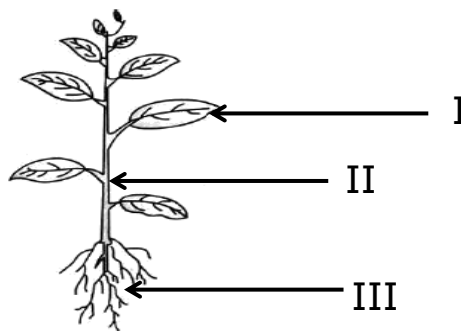
- A. Going to school
- B. Playing
- C. Sleeping

21. All the following are plants except
- A. mango
 - B. cassava
 - C. goat
22. The following affect the rate of evaporation except
- A. wind
 - B. surface area
 - C. pressure
23. The process whereby a solid objects changes to a gas directly is called
- A. condensation
 - B. freezing
 - C. sublimation
24. The process by which living things respond to stimuli is called
- A. excretion
 - B. irritability
 - C. growth
25. An example of precipitation is
- A. sleet
 - B. storm
 - C. wind
26. Drinking polluted water is likely to cause
- A. malaria
 - B. diarrhea
 - C. covid-19
27. The following are factors needed for germination to occur except
- A. water
 - B. oxygen
 - C. soil
28. All the following are examples of dicot plants except
- A. okro
 - B. pumpkin
 - C. maize
29. Which of the body parts detects smell?
- A. eyes
 - B. nose
 - C. hand
30. The type of germination in which the cotyledon is above the soil is called
- A. hypogeal germination
 - B. epigeal germination
 - C. dicotyledon

SECTION B

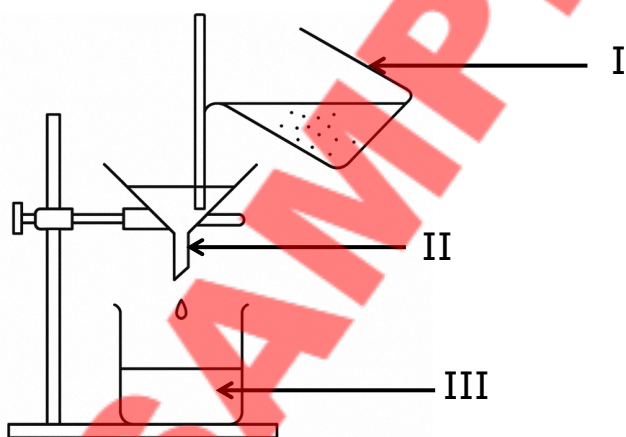
Answer all Questions in this section

1. (a) The diagram below shows the parts of a flowering plant. Study it carefully and answer the questions that follow.



- i. Name the parts labelled **I**, **II**, **III**.
- ii. State one function for each of the parts labelled **II** and **III**.
- iii. State the parts where:
 - a. Pollination occurs;
 - β. Transpiration occurs.
- iv. Give one importance of a plant.

(b) The diagram below is used to separate a solid-liquid mixture. Study it carefully and use to answer the questions that follow.



- i. Identify the method above.
 - ii. Name the parts labelled **I**, **II** and **III**.
 - iii. Give three examples of a solid-liquid mixture.
2. (a) i. Explain the term living things.
- ii. Give three examples each of:
 - a. Animals;
 - β. Plants.
- (b) i. What are metals?
- ii. Give three examples of metals.
- iii. State three properties of metals.
- (c) i. What is pure water?
- ii. Give two importance of drinking pure water.
- iii. Mention three human external parts and give their function.

ONE VISION EXAMINATIONS CENTRE (OVEC)



(A Credible Private Examinations Group)

END OF FIRST TERM EXAMINATION - DEC.

HISTORY

1 hour 40 minutes

| | | | |
|----------------------|--|---------------------|--------------|
| NAME OF PUPIL | | | |
| SIGNATURE | | Question no. | Marks |
| CLASS | BASIC 3 | | |
| INSTRUCTIONS | 1. Write your name and indicate your signature in the spaces provided above. | | |
| | 2. Answer the questions as stated by the instructions given before each section. | | |
| | 3. Your teacher will guide you to understand the questions before you start. | | |
| | TOTAL | | |

Read each question carefully and choose the correct option from lettered A, B and C.

1. In the olden days, goods were exchanged for goods because there was no
- A. stands
 - B. money
 - C. cards

Use the picture below to answer questions 2 and 3.



2. The items displayed are
- A. stick and water
 - B. cup and straw
 - C. ink and feather
3. What are the materials used for?
- A. Writing
 - B. Cutting
 - C. Filling

Use the ancient tool below to answer questions 4 and 5.



4. Identify the tools above.
- A. Rope and line
 - B. Arrow and bow
 - C. Tape and cane
5. The tool was used in the past for
- A. planting seeds
 - B. weeding around
 - C. hunting for animals

6. Which region is the location of the Ewe people?
- A. Volta
 - B. Savannah
 - C. Western
7. Examples of coastal towns include Cape Coast, Osu, and
- A. Kumasi
 - B. Elmina
 - C. Tamale
8. Which of these brings people in different ethnic groups together?
- A. Marriage
 - B. War
 - C. Drawing
9. The design material obtained from animals is
- A. bone
 - B. thread
 - C. seed
10. Which of the following items is used for cooking?
- A. Leather
 - B. Cowries
 - C. Shea butter
11. Eastern region is to Koforidua as Western is to
- A. Sunyani
 - B. Accra
 - C. Takoradi
12. Which of the following is not one of the major ethnic groups?
- A. Akan
 - B. Ewe
 - C. Fante

13. Major ethnic groups travelled to their present day locations by
- A. foot
 - B. ship
 - C. plane

Answer questions 14 and 15 using the picture below.



14. What is the name of the item of trade above?
- A. Cowries
 - B. Carrots
 - C. Beads
15. The items were used in the olden days to exchange for
- A. goods
 - B. stones
 - C. leaves
16. Kpanlogo and Borborbor are examples of Ghanaian
- A. food
 - B. dance
 - C. language
17. An example of intergroup wars fought in the olden days is
- A. the battle of Feyiase
 - B. the war of Accra
 - C. the battle of Wa
18. In the year 1869, the Asantes fought in the
- A. Ho war
 - B. Ada war
 - C. Osu war
19. The Ga people moved to Ghana from
- A. Togo
 - B. Nigeria
 - C. Burkina Faso
20. Ethnic groups are identified as groups of people with a common way of
- A. age
 - B. money
 - C. life
21. Examples of local games played in Ghana are
- A. skating and handball
 - B. TV game and football
 - C. ampe and oware
22. Shea butter is obtained from the
- A. middle belt
 - B. savannah belt
 - C. coastal belt
23. Which region serves as the home of the Gonja people?
- A. Ashanti Region
 - B. Savannah Region
 - C. Upper East
24. Which of these ethnic groups is located in Northern Ghana?
- A. Gonja
 - B. Ewe
 - C. Asante
25. Obrumankoma was one of the warriors who led the people of
- A. Bono
 - B. Ewe
 - C. Fante

SECTION B

[25 MARKS]

Answer **all** questions.

1. Circle the things that brought major ethnic groups together.

War Inter-marriage Trade Cheating

2. Complete the table by grouping the tribes under the ethnic groups.

Asante Gonja Fante Mamprusi Frafra Bono

| Mole Dagbani | Akan |
|---------------------|-------------|
| | |
| | |
| | |

3. Using lines, match the items of exchange to their uses.

| | |
|-------------|----------|
| Gold | Pomade |
| Fish | Pot |
| Shea butter | Necklace |
| Clay | Food |

ONE VISION EXAMINATIONS CENTRE (OVEC)



(A Credible Private Examinations Group)

END OF FIRST TERM EXAMINATION - DEC.

RELIGIOUS AND MORAL EDUCATION


1 hour 40 minutes

| | | | |
|----------------------|--|---------------------|--------------|
| NAME OF PUPIL | | | |
| SIGNATURE | | Question no. | Marks |
| CLASS | BASIC 3 | | |
| INSTRUCTIONS | 1. Write your name and indicate your signature in the spaces provided above. | | |
| | 2. Answer the questions as stated by the instructions given before each section. | | |
| | 3. Your teacher will guide you to understand the questions before you start. | | |
| | TOTAL | | |

Read each question carefully and choose the correct option from lettered A, B and C.

1. Which human activity keeps the environment safe?
A. Weeding around
B. Pouring water away
C. Drying wet clothes
2. Illegal mining (galamsey) is not a good practice because it
A. pollutes fresh air
B. makes water good to drink
C. destroys water and land

Use the picture below to answer questions 3 to 5.



3. The picture shows
A. tree planting
B. bush burning
C. water pollution
4. The activity in the picture destroys
A. rivers flow
B. animal life
C. stone throw
5. What does the activity bring to the environment?
A. Cold
B. Heat
C. Food
6. The environment can be kept clean and healthy by
A. clearing dirty gutters
B. throwing rubbers around
C. cutting paper into pieces

7. A dirty environment causes people to
A. study hard
B. be strong
C. fall sick

Use the picture below to answer questions 8 to 10.



8. Which act is the worshipper performing?
A. Prayer
B. Singing
C. Fasting
9. The worshipper in the picture is a
A. Muslim
B. Christian
C. Traditionalist
10. Which objects does the man worship with?
A. Holy Qur'an
B. Holy Bible
C. Holy Story
11. The Gas call God Nyumo and the Ewes call Him
A. Nawuni
B. Onyame
C. Mawu
12. Which religious people do not read a holy book?
A. Muslim
B. Christian
C. Traditionalist

13. Muslims read the Holy Qur'an to learn more about
A. gods
B. Allah
C. Jesus

14. The objects are man-made; they are used at



- A. farm
- B. beach
- C. school

15. People who love each other live in

- A. fear
- B. peace
- C. anger

16. Doing what you are told to do means you are

- A. happy
- B. obedient
- C. beautiful

17. Muslims believe Allah made man from dust, a sperm drop, and

- A. blood
- B. stones
- C. hair

18. The word of God is always

- A. true
- B. false
- C. lies

19. Different kinds of people control God's

- A. angels
- B. parents
- C. creation

20. The last thing God created were

- A. eggs
- B. trees
- C. humans

21. Which animal is used by man as a friend?

- A. Dog
- B. Cow
- C. Lion

22. Who were the first people God created according to Christians?

- A. Musah and Mary
- B. John and Lois
- C. Adam and Eve


23. The following acts help us to maintain a good relationship except

- A. respect
- B. anger
- C. love

24. Clean-up exercise is done in our communities to keep the environment

- A. wet
- B. clean
- C. dirty

25. The main material for making the object below is obtained from



- A. pipes
- B. animals
- C. trees

SECTION B

[25 MARKS]

Answer **all** questions.

1. Group the following activities under the table below.

| | | |
|--------------------|---------------|------------------|
| Cutting down trees | Tree planting | Littering around |
| Legal mining | Smoking | Clearing weeds |

| Destroys the environment | Keeps the environment safe |
|---------------------------------|-----------------------------------|
| | |
| | |
| | |


2. Give two things we get from the natural object drawn below.



- i. _____
- ii. _____

3. Draw the following religious worship items.

(a) Cross



(b) Holy Qur'an



ONE VISION EXAMINATIONS CENTRE (OVEC)



(A Credible Private Examinations Group)

END OF FIRST TERM EXAMINATION - DEC.

COMPUTING

1 hour 40 minutes

| | | | |
|----------------------|--|---------------------|--------------|
| NAME OF PUPIL | | | |
| SIGNATURE | | Question no. | Marks |
| CLASS | BASIC 3 | | |
| INSTRUCTIONS | 1. Write your name and indicate your signature in the spaces provided above. | | |
| | 2. Answer the questions as stated by the instructions given before each section. | | |
| | 3. Your teacher will guide you to understand the questions before you start. | | |
| | TOTAL | | |

Read each question carefully and choose the correct option from lettered A, B and C.

1. We use double-clicking to
 - A. open files and programs
 - B. shut down the computer
 - C. clean the mouse
2. Which of these is an ICT tool?
 - A. Chalk
 - B. Radio
 - C. Table
3. Which tool is used to talk to someone far away?
 - A. Television
 - B. Radio
 - C. Telephone
4. Which button is used for double-clicking?
 - A. Left button
 - B. Right button
 - C. Enter key
5. The television is used to
 - A. wash clothes
 - B. show pictures and news
 - C. talk to our friends
6. We can learn with ICT tools such as
 - A. football
 - B. computer
 - C. bucket
7. What does a single click mean?
 - A. Pressing a key on the keyboard
 - B. Clicking the mouse once
 - C. Dragging the mouse
8. When you click once on an icon, it becomes
 - A. red
 - B. deleted
 - C. selected
9. A single click is a mouse skill that can select
 - A. screen
 - B. icon
 - C. keyboard
10. ICT tools help us to
 - A. sweep the classroom
 - B. share and receive information
 - C. play on the field

11. What does double-clicking mean?
- A. Clicking the mouse two times quickly
 - B. Pressing the keyboard
 - C. Typing numbers
12. You double-click on the desktop to
- A. open a program
 - B. save a file
 - C. log out
13. Game applications help us to
- A. learn and practice skills
 - B. sweep the lab
 - C. break the computer
14. Which mouse button do we use for a single click?
- A. Right button
 - B. Scroll wheel
 - C. Left button
15. A mouse game helps us learn to
- A. sing properly
 - B. jump properly
 - C. use the mouse properly
16. Playing typing games helps us to
- A. learn letters faster
 - B. count money
 - C. ride a bicycle
17. Which part of the computer do we use most when playing a computer game?
- A. Keyboard
 - B. Monitor
 - C. Speaker
18. Which of these is a good reason to use games in ICT class?
- A. To waste time
 - B. To damage the keyboard
 - C. To learn while having fun
19. A single click is used to
- A. open a program
 - B. select an item
 - C. move the monitor
20. What happens when you double-click a program?
- A. It disappears
 - B. It opens
 - C. It closes

SECTION B
Answer all questions

1. Show which of these ICT tools below is used to perform the following functions.

(Photocopier machine, Speedometer, Computer, Radio, Television)

(a) Listening to music and news.

(b) Measuring the speed of cars.

(c) Watching videos and news.

(d) Making copies of information on paper.

(e) Processing and storing data.

2. Draw a computer mouse and label the parts.

ONE VISION EXAMINATIONS CENTRE (OVEC)



(A Credible Private Examinations Group)

END OF FIRST TERM EXAMINATION - DEC.

CREATIVE ARTS

1 hour 40 minutes

| | | | |
|----------------------|--|---------------------|--------------|
| NAME OF PUPIL | | | |
| SIGNATURE | | Question no. | Marks |
| CLASS | BASIC 3 | | |
| INSTRUCTIONS | 1. Write your name and indicate your signature in the spaces provided above. | | |
| | 2. Answer the questions as stated by the instructions given before each section. | | |
| | 3. Your teacher will guide you to understand the questions before you start. | | |
| | TOTAL | | |

Read each question carefully and choose the correct option from lettered A, B and C.

1. People who make songs are called
- A. designers
 - B. drummers
 - C. musicians

2. The visual art object below is used for



- A. hitting
- B. cleaning
- C. sleeping

3. Nadia Buari acts in movies. This means she is an
- A. editor
 - B. actress
 - C. image

4. A basket is a local artwork made from
- A. rubbers
 - B. rocks
 - C. plants

5. Kente weavers make clothes with
- A. wires
 - B. threads
 - C. sheets

6. Local foods in Ghana include
- A. fufu
 - B. pizza
 - C. ice cream

7. A star symbol below found on the Ghana



- A. store
- B. map
- C. flag

8. A trumpet is a musical instrument played with the
- A. mouth
 - B. shoulder
 - C. leg

9. When children hear songs they like, they
- A. dance
 - B. laugh
 - C. shout

10. The action shown by the picture below is




- A. measuring
- B. hitting
- C. writing

11. Twinkle, twinkle, little star is a
- A. play
 - B. dance
 - C. rhyme

12. All the beautiful paintings on the walls are made with
- A. rubbers
 - B. brushes
 - C. sticks

13. Which people perform jokes to make people laugh?
- A. Comedians
 - B. Painters
 - C. Musicians

14. The design below is made up of



- A. lines
- B. colours
- C. tools

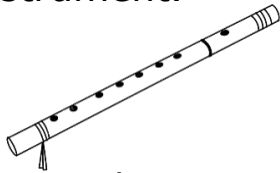
15. Which material cannot be used for colouring?

- A. Dye
- B. Crayon
- C. Thread

16. Odwira and Homowo are

- A. foods
- B. music
- C. festivals

17. Identify the musical instrument.




- A. Flute
- B. Trumpet
- C. Guitar

18. Example of local dance are

- A. La and Tamale
- B. drum and sticks
- C. Takai and Adowa

Use the picture below to answer questions 19 to 21.



19. The picture shows a

- A. field
- B. station
- C. street

20. The picture can be created by

- A. playing
- B. drawing
- C. weaving

21. The objects in the picture are natural and

- A. artificial
- B. God made
- C. simple

22. Ink, water and poster colour are

- A. dry materials
- B. wet materials
- C. hot materials

23. Most of the boxes we use in our homes are made from

- A. rocks
- B. papers
- C. metals

24. Physical things in our environment include trees and

- A. words
- B. sound
- C. water

25. Select the artworks made with leather.

- A. Bottle and boxes
- B. Football and bag
- C. Chair and bed

SECTION B

[25 MARKS]

Answer **all** questions.

1. Draw and colour the following things in the physical environment in the boxes.

(a) Shirt



(b) Drum



(c) Paint brush



2. Match the following objects to their uses with lines.

| | |
|--------|-------------------------------|
| Thread | Cutting objects into pieces |
| Knife | Molding local pots and cups |
| Pencil | Applying paint onto a surface |
| Clay | Joining two clothes together |
| Brush | Writing words on paper |

ONE VISION EXAMINATIONS CENTRE (OVEC)



END OF FIRST TERM EXAMINATION - DEC.

GHANAIAN LANGUAGE (ASANTE TWI)

1 hour 40 minutes

BASIC 3

PRINT IN BLOCK LETTERS

Name: _____
Surname Other Names
Date: _____ Signature: _____

OBJECTIVE TEST

Kenkan anwonsɛm yin a fa bua nɛmmisa 1 - 5.

Ɔbaatan a ne mma reha no,
Nanso ɔdi akukuruhweaseɛ,
De pɛ ɛdɔm ano aduane
Ka sɛ:
Afei deɛ, mabrɛ.

1. Nnipakuo yi mu deɛ ɛwɔ he na ne mma reha no?
A. Ɔbaatan
B. Wɔfa
C. Papa
2. Adɛn nti na ɔdi akukuruhweaseɛ?
A. Ɔde pɛ animuonyam
B. Ɔde pɛ ɛdɔm ano aduane
C. Ɔde yi apaɛ

3. Anwonsɛm no wɔ nsensaneeɛ
A. baako
B. enum
C. ɛnan
4. Yɛde atwerɛdeɛ hyɛ nsensaneeɛ biara ase.
A. ketewa
B. kurukuruwa
C. akɛsɛɛ
5. Adɛn nti na ɔtwerɛfoɔ no ka sɛ, "mabrɛ"?
A. Ɔkasa dodo
B. Ɔyɛ adwumaden
C. Ɔda hatee

6. Yɛakyɛ Asante Twi ntwɛɛdɛɛ no mu
- enan
 - m̄miɛnsa
 - m̄mienu
7. "A, B, D, E, G" wɔ atwɛɛdɛɛ kuo bɛn mu?
- Atwɛɛdɛɛ akɛsɛɛ
 - Atwɛɛdɛɛ nketewa
 - Atwɛɛdɛɛ tea
8. Yɛde ɛnne ne anom ntwɛɛdɛɛ bom a, yɛbɛnya
- aduonu-baako
 - aduonu-nan
 - aduonu-m̄mienu
9. Atwɛɛdɛɛ yi mu baako nyɛ ɛnne ntwɛɛdɛɛ?
- E
 - B
 - ɔ
10. Anom ntwɛɛdɛɛ no nyinaa yɛ
- du-m̄mienu
 - du-nsia
 - du-num
11. ɛnne ntwɛɛdɛɛ dodoɔ sɛn na ɛwɔ asemfua "hyireguo" mu?
- Enan
 - Nwɔtwe
 - Enum
12. Anom ntwɛɛdɛɛ dodoɔ sɛn na ɛwɔ asemfua "bayerɛ" mu?
- Nsia
 - Enum
 - M̄miɛnsa
13. Abɔfodwom yɛ dwom a wɔto ma
- afarefoɔ
 - abɔmmɔfoɔ
 - akuafɔɔ
14. Adwumayɛfoɔ nnwom bɛn nie "merebɔ me dadeɛ ano kyan kyan kyan"?
- Atomfoɔ
 - Abɛtwafoɔ
 - Kenkenwonofɔɔ
15. Abagyegyɛ nnwom boa ma
- m̄mɔfra su denden
 - m̄matan gye wɔn ahome
 - m̄mɔfra ntumi nna
- Hwehwɛ ɔkasamu a wɔde atwɛɛdɛɛ akɛsɛɛ atwɛɛ no yie wɔ nsem̄misa 16-20**
16. A. Asamoɔ kɔ afuom.
 B. asamoɔ kɔ afuom
 C. Asamoɔ kɔ Afuom
17. A. ɔduruu ha yawoada.
 B. ɔduruu ha Yawoada.
 C. ɔduruu ha Yawoada

18. A. Gye sika no ma Joyce.
B. gye sika no ma joyce.
C. Gye Sika no Ma joyce.

19. A. Papa no wɔ nkokɔ bebre
B. papa no wɔ Nkokɔ Bebre
C. Papa no Wɔ nkokɔ Bebre

20. A. nkran yɛ Ghana ahenkuro
B. Nkran yɛ ghana ahenkuro
C. Nkran yɛ Ghana ahenkuro.

Kyerɛ adeyɔ a ɛwɔ ɔkasamu yimu.

21. Ɔkyerɛkyerɛni no pɛ mpaebɔ.
A. Pɛ
B. Mpaebɔ
C. Ɔkyerɛkyerɛni

22. Judith reto dwom wɔ asɔre.
A. Asɔre
B. Judith
C. Reto

23. Mmarima no boroo ɔkorɔmfɔɔ no.
A. Boroo
B. Mmarima
C. Ɔkorɔmfɔɔ

24. Agya Asiamah beko Tamale ɔkyena.
A. Tamale
B. Ɔkyena
C. Beko

25. Gye sika no seesei ara.
A. Sika
B. Gye
C. Seesei

SECTION B

[50 MARKS]

Bua nsemmissa a ɛwɔ ɔfa ha no nyinaa.

1. Fa **atwerɛdeɛ kɛseɛ** twerɛ ɔkasamu yi yie.

(a) Me maame ko bolgatanga.

(b) aboakyere yɛ afahyɛ.

(c) Nsuo tɔ wɔ oforisuo bosome mu.

(d) yawoada ye Ama awoda.

(e) Fa akyedee no ma martha.

2. Fa **nsanhɔ** (,) **Osiwieeɛ** (.), **mmisaeɛ** (?) siesei akasamu yi yie.

(a) Wadi mfee sɛn

(b) Akokɔ no awu

(c) Kwadwo Ama ne Afia kɔ sukuu.

(d) Ehefa na chye

(e) Mmɔfra no reto dwom

ONE VISION EXAMINATIONS CENTRE (OVEC)



(A Credible Private Examinations Group)

END OF FIRST TERM EXAMINATION - DEC.

FRENCH LANGUAGE

1 hour 40 minutes

| | | | |
|----------------------|--|---------------------|--------------|
| NAME OF PUPIL | | | |
| SIGNATURE | | Question no. | Marks |
| CLASS | BASIC 3 | | |
| INSTRUCTIONS | 1. Write your name and indicate your signature in the spaces provided above. | | |
| | 2. Answer the questions as stated by the instructions given before each section. | | |
| | 3. Your teacher will guide you to understand the questions before you start. | | |
| | TOTAL | | |

SECTION A

[60 MARKS]

Read the text below and answer the questions below.

Je m'appelle Amama Awudu. Voici ma mère. Elle s'appelle madame Isha Ahmed. Elle a trente-sept ans. Madame Rose est grande. Elle est grosse. Son teint est clair. Elle est belle.

- | | |
|--|---|
| <p>1. Je m'appelle</p> <p>A. Afia</p> <p>B. Amama Awudu</p> <p>2. Voici</p> <p>A. ma sœur</p> <p>B. ma mère</p> <p>3. Comment s'appelle madame?</p> <p>A. Isha Ahmed</p> <p>B. Amama Awudu</p> <p>4. Quel est son âge?</p> <p>A. 27</p> <p>B. 37</p> | <p>5. Qui est grosse?</p> <p>A. Madame</p> <p>B. La fille</p> <p>6. Comment est madame? Elle est</p> <p>A. petite</p> <p>B. grande</p> <p>7. Son teint est</p> <p>A. clair</p> <p>B. noir</p> <p>8. est belle.</p> <p>A. Ma mère</p> <p>B. Je suis</p> |
|--|---|

Choose the correct answer from the options to complete the sentences below.

- | | |
|---|--|
| <p>9. Comment s'appelle père? Monsieur Yaya.</p> <p>A. ton</p> <p>B. ta</p> | <p>10. tu t'appelles? Je m'appelle Helene.</p> <p>A. Quel</p> <p>B. Comment</p> |
|---|--|


11. Quel as-tu? J'ai dix ans.

- A. âge
- B. age

12. règle est longue.

- A. Le
- B. La


Identify the images below and write the sentences in French.



- A. Un garçon
- B. Deux garçons



- A. Une maison
- B. Une église



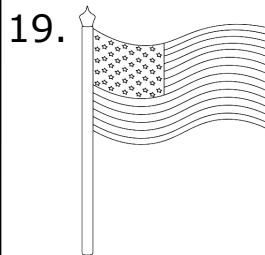
- A. Un livre
- B. Un sac au dos



- A. Un lit
- B. Un stylo




- A. Une famille
- B. Un ami



- A. Un pantalon
- B. Un drapeau



- A. Une maison
- B. Une église



- A. Un chien
- B. Un chat

SECTION B

[40 MARKS]

Answer **all** questions.

1. List five (5) parts of the human body. **[20 marks]**

Example: Les cheveux

(a) _____

(b) _____

(c) _____

(d) _____

(e) _____

2. Complete the sentences below. **[20 marks]**

Examples: Je suis élève.

Tu es élève

(a) _____ est élève.

(b) Nous _____ élèves.

(c) Vous êtes _____.

(d) Ils _____ élèves.

(e) _____ sont élèves.