


ONE VISION EXAMINATIONS CENTRE (OVEC)



(A Credible Private Examinations Group)

END OF FIRST TERM EXAMINATION - DEC

ENGLISH LANGUAGE

NAME OF PUPIL			
SIGNATURE			
CLASS	BASIC 4	DURATION	1 hour 40 minutes
INSTRUCTIONS	<p>SECTION A: Answer All Questions in this Section by shading the correct answer on your Objective Test answer sheet. Use 2B Pencil throughout. Shade like this </p> <p>SECTION B: This is the THEORY Part. It also contains other sub- divisions. Follow the instructions given before each part of this section. Answer this part in your Answer Booklet.</p> <p><i>Do not open this booklet until you are told to do so. While you are waiting, read and observe the instructions given above carefully. Write your Name and indicate your Signature in the spaces provided above.</i></p>		

From the options lettered A to D, select the abstract noun in each sentence.

1. The people were asked to show love to one another.
A. people
B. love
C. another
D. asked
2. Her kindness won her the trophy.
A. kindness
B. trophy
C. won
D. her
3. There was no wisdom in what he said.
A. said
B. was
C. wisdom
D. there
4. The chief invited the strangers into his kingdom.
A. chief
B. strangers
C. invited
D. kingdom
5. Their loyalty was duly rewarded.
A. loyalty
B. dully
C. their
D. rewarded
6. Even in his adulthood, he is still childish.
A. childish
B. even
C. adulthood
D. his
7. We need freedom to play around.
A. need
B. play
C. around
D. freedom

From the options lettered A to D, select the collective noun in each sentence.

8. The band has arrived on time.
A. band
B. arrived
C. time
D. has

9. When the teacher entered, the class was very noisy.
A. noisy
B. teacher
C. entered
D. class
10. The troops came without their weapons.
A. without
B. troops
C. came
D. their
11. The congregation visited the people with gifts.
A. congregation
B. people
C. gifts
D. visited
12. I witnessed the crowd at the mob scene.
A. scene
B. witnessed
C. crowd
D. mob
13. The gang was arrested today.
A. arrested
B. gang
C. today
D. was

From the options lettered A to D, select the determiner which suits each sentence.

14. While walking with children, they were fighting one another.
A. this
B. that
C. any
D. those
15. She bought shirt for her brother.
A. an
B. some
C. many
D. a

16. Mother knew plans already.
A. him
B. a
C. her
D. an
17. He wore original shirt to church.
A. an
B. some
C. a
D. these
18. Mother saw tears in your eyes.
A. many
B. few
C. much
D. three
19. Did you receive money from the man?
A. some
B. many
C. theirs
D. few
20. She kept bag on the table.
A. ours
B. yours
C. her
D. him

From the options lettered A to D, select the right pronouns to complete the sentences.

21. The girl said she took dress to the seamstress.
A. mine
B. her
C. him
D. it
22. I know children from my village.
A. these
B. that
C. a
D. this
23. She has taken new bag to school.
A. yours
B. my
C. him
D. mine

24. That man has money. can buy many houses.
A. she
B. they
C. you
D. he
25. Many people see him, but do not call him.
A. we
B. she
C. he
D. they

From the options lettered A to D, choose the correct adjectives to complete the sentences.

26. The leader is a very person.
A. better
B. calmer
C. best
D. good
27. Grandmother looks today than yesterday.
A. stronger
B. weak
C. strong
D. weakest
28. Of the twins, who is the?
A. smartest
B. smart
C. very smart
D. smarter
29. His house to the hospital.
A. closest
B. close
C. closer
D. very closer
30. The groom is than the bride.
A. taller
B. very tall
C. tallest
D. too tall

SECTION B

[40 MARKS]

Answer **all** questions.

Read the passage below carefully and answer the questions that follow.

It was the first day back at school, and David felt a mix of excitement and nerves. During the vacation holidays, David visited his cousin in the mountains, where they went hiking and saw beautiful waterfalls.

Now, David was ready to start the fourth grade. As he entered the classroom, his new teacher, Mr. Green, welcomed him with a warm smile and handed him a name tag. David found a seat next to his best friend, Emma, and they started chatting about the time he and his cousin reached the top of a mountain. After everyone shared their stories, Mr. Green explained that they would be learning about different countries this year. David was happy because he loved learning about places around the world.

As the day went on, the class worked together to create a big world map on the wall, each student adding a country they wanted to learn about. By the end of the day, David felt very excited about all the new things he would discover this year.

1. What activities did David do during his vacation holidays?
2. How was David welcomed by his new teacher?
3. What did Mr. Green ask the class to do after they arrived?
4. What did David love doing?
5. What did the class do to show teamwork?

SECTION C

Answer one question only from this part. Your composition should be 150 words long.

1. Write a story you heard that made you understand the importance of greetings.
2. Give a narration on how your new school welcomed you as a new pupil.


ONE VISION EXAMINATIONS CENTRE (OVEC)



(A Credible Private Examinations Group)

END OF FIRST TERM EXAMINATION - DEC.

MATHEMATICS

NAME OF PUPIL			
SIGNATURE			
CLASS	BASIC 4	DURATION	1 hour 40 minutes
INSTRUCTIONS	<p>SECTION A: Answer All Questions in this Section by shading the correct answer on your Objective Test answer sheet. Use 2B Pencil throughout. Shade like this </p> <p>SECTION B: This is the THEORY Part. It also contains other sub- divisions. Follow the instructions given before each part of this section. Answer this part in your Answer Booklet.</p> <p><i>Do not open this booklet until you are told to do so. While you are waiting, read and observe the instructions given above carefully. Write your Name and indicate your Signature in the spaces provided above.</i></p>		

1. Which of the following number sentences is not correct?

- A. $45 + 65 = 110$
- B. $36 \div 3 = 12$
- C. $50 - 31 = 29$
- D. $7 \times 5 = 35$

2. Find the missing number if

$$6783 = 6000 + 700 + \underline{\quad} + 3.$$

- A. 8
- B. 80
- C. 800
- D. 8000

3. Which sign compares the numbers best? $4571 \underline{\quad} 4517$

- A. $>$
- B. $<$
- C. $=$
- D. $+$

4. Which number sentence is true about the shapes?



- A. 3×3
- B. 6×2
- C. 2×3
- D. 4×2

5. How many faces does a full orange have?

- A. 0
- B. 1
- C. 2
- D. 3

6. How many bottles of bottled drinks can 2 boys share without a remainder?

- A. 21
- B. 25
- C. 24
- D. 29

7. How many five cedis notes will make GH¢ 45.00?

- A. 7
- B. 8
- C. 9
- D. 10

8. The number 15 in Roman Numerals is

- A. XV
- B. XI
- C. VII
- D. IV

9. The pattern shows counting forward in 30, 70, 110, 150, 190,

- A. 40s
- B. 50s
- C. 60s
- D. 70s

10. Find the highest common factor of 8 and 12.

- A. 6
- B. 5
- C. 3
- D. 4

11. Solve $XII + XIV = \underline{\quad}$

- A. XXV
- B. XIII
- C. XXIII
- D. XXVI

12. Six groups of seven mangoes would give

- A. 13 mangoes
- B. 21 mangoes
- C. 42 mangoes
- D. 48 mangoes

13. What is the value of 7 in 67,342?

- A. Seven
- B. Seventy
- C. Seven hundred
- D. Seven thousand


14. The factors of 10 are 1, 2, 10, and

- A. 3
- B. 4
- C. 5
- D. 6

15. How many factors does the number 12 have?

- A. 6
- B. 7
- C. 8
- D. 9

16. How many sides does the shape have?



- A. 7
- B. 8
- C. 9
- D. 10

17. What is the rule for the pattern:
20, 25, 30, 35, 40,

- A. Halving
- B. Doubling
- C. Subtract 5
- D. Add 5

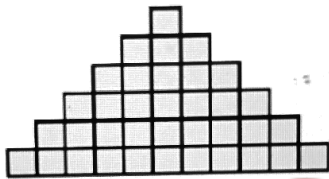
18. Amadu gave six boys 50 pesewas each. How much did he give them in all?

- A. GH¢ 1.50
- B. GH¢ 2.50
- C. GH¢ 2.80
- D. GH¢ 3.00

19. Express "sixteen thousand and sixteen" using figures.

- A. 16,160
- B. 16,016
- C. 16,106
- D. 16,061

20. Count and select the number of blocks.




- A. 30
- B. 32
- C. 34
- D. 36

21. What is the value of the digit 3 in the number 31,256?

- A. 30
- B. 300
- C. 3,000
- D. 30,000

22. How many groups of 4 dots are there?



- A. Six
- B. Seven
- C. Eight
- D. Nine

23. A line of symmetry divides a shape into two

- A. equal parts
- B. small parts
- C. big parts
- D. full parts

24. The number 29 is written in Roman Numerals as

- A. XXII
- B. XXIV
- C. XXVI
- D. XXIX

25. Round off 646 to the nearest ten.

- A. 640
- B. 650
- C. 660
- D. 670

26. Which of the following is a 3D object?

- A. Light
- B. Thread
- C. Milo tin
- D. Paper

27. A flat paper and a leaf are

- A. 1D objects
- B. 2D objects
- C. 3D objects
- D. 4D objects

28. Asana is 19 years old. Her age in Roman Numerals is

- A. XIII
- B. XVI
- C. XVI
- D. XIX

29. What is the least common multiple (LCM) of 6 and 4?

- A. 6
- B. 8
- C. 12
- D. 24

30. Choose the smallest number.

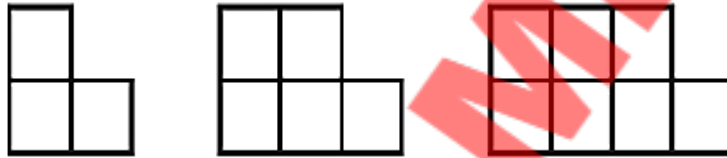
- A. 45,493
- B. 45,495
- C. 45,496
- D. 45,498

SECTION B

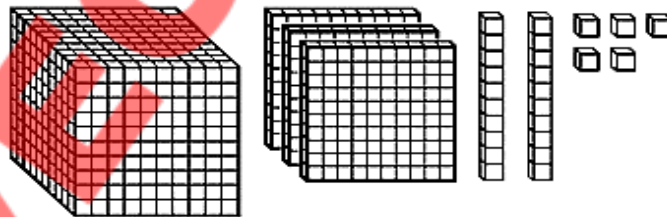
[40 MARKS]

Answer **all** questions.

1. (a) Write the given number in figures:
- Four thousand, three hundred and seventy-eight;
 - Fifteen thousand, and twenty-nine.
- (b) Write the following numbers in Roman Numerals.
- 30
 - 9
 - 23
 - 15
- (c) Using straight lines, draw 2D shapes with
- 4 sides
 - 5 sides
- (d) Draw the next patterns of blocks.



2. (a) i. List all the factors of 15.
ii. Write the first ten multiples of 4.
- (b) What is the place value of each of the underlined digits?
- 43, 052
 - 87, 326
 - 6,09 5
- (c) Write the number modelled with the blocks.



- (d) Copy and complete the pattern table.

Number of squares	Number of lines
1	4
2	8
3	12
4	
5	
6	

ONE VISION EXAMINATIONS CENTRE (OVEC)



END OF FIRST TERM EXAMINATION - DEC.

SCIENCE

BASIC 4

1 hour 40 minutes

PRINT IN BLOCK LETTERS

Name: _____
Surname Other Names

Date: _____ **Signature:** _____

OBJECTIVE TEST

Answer all questions.

- All the following are parts of insects except
A. head
B. thorax
C. scales
D. abdomen
- The process whereby living things increase in number is called
A. respiration
B. multiplication
C. growth
D. reproduction
- All the following are characteristics of shrubs except
A. it has more than one trunk
B. it has big trunks
C. it has more colourful flowers
D. it has a short trunk
- A mixture of water and juice can be best separated by
A. filtration
B. evaporation
C. separating funnel
D. distillation
- The first stage in the lifecycle of maize is
A. seed
B. sprout
C. seedling
D. fruits
- The planet Earth takes to make one complete rotation.
A. 14 hours
B. 34 hours
C. 24 hours
D. 4 hours

7. The process whereby the leaves of a plant lose water is called
- evaporation
 - transpiration
 - condensation
 - precipitation
8. When alcohol is added to water, it
- sublimes
 - melts
 - dissolves
 - freezes
9. Which of the following substances could be used to purify water?
- Chlorine
 - Oxygen
 - Fluorine
 - Iodine
10. The function of the teeth in digestion is to
- make swallowing easy
 - masticate the food into small pieces
 - digest the food
 - absorb the food
11. All the following are examples of mammals except
- dog
 - cow
 - pigeon
 - rat
12. An example of a reptile is
- tortoise
 - butterfly
 - hawk
 - whale
13. Animals that feed on plants only are called
- omnivores
 - carnivores
 - parasite
 - herbivores
14. A mixture of oil paint and water is said to be
- uniform
 - miscible
 - immiscible
 - solution
15. All the following apparatus can be used to set up a distillation except
- condenser
 - thermometer
 - stop cork
 - bunsen burner
16. Which of the following heavenly bodies cannot be seen in the night sky?
- Moon
 - Stars
 - comets
 - Sun
17. Good drinking water should
- have taste
 - have colour
 - have no colour
 - contain dirty particles
18. The part of a plant that holds it firmly in the soil is called
- stem
 - root
 - flower
 - leave
19. A factor needed for a seed to germinate is
- soil
 - air
 - carbon dioxide
 - humus
20. The part of the body that performs a specific task is called
- cell
 - tissue
 - organ
 - system

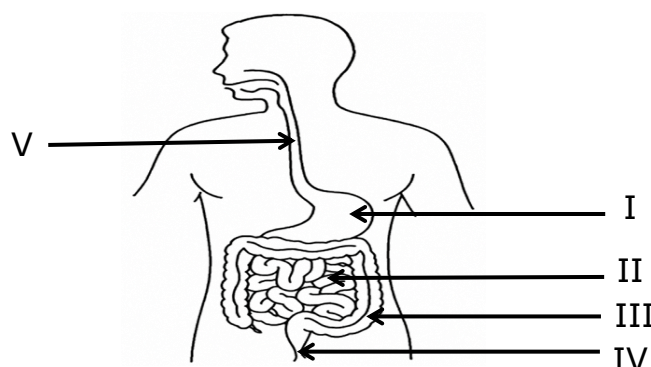
21. An example of a non-living thing is
- cat
 - chair
 - dog
 - orange plant
22. All the following are human digestive organs except
- trachea
 - stomach
 - small intestine
 - mouth
23. One feature of a reptile is
- they have hair
 - they do not have external ears
 - they have wings
 - they fly
24. An animal that feeds on both plants and animals is
- carnivores
 - omnivores
 - herbivores
 - parasite
25. Which of the following parts does the digestion of food occur in?
- Oesophagus
 - Stomach
 - Liver
 - Large intestine
26. All the following methods are used to purify water except
- melting
 - boiling
 - addition of chlorine
 - addition of alum
27. Which of the following connects the mouth to the stomach?
- Large intestine
 - Small intestine
 - Liver
 - Oesophagus
28. An example of a liquid is
- stones
 - kerosene
 - cement block
 - ice block
29. An example of an amphibian is
- cat
 - dog
 - snake
 - frog
30. An example of a tree is
- beans plant
 - yam plant
 - mango
 - pride of barbados

SECTION B

[40 MARKS]

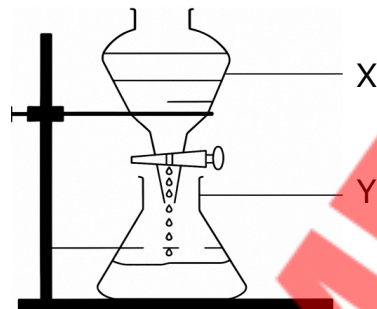
Answer **three** questions in all, question **1** and any other two.

1. (a). The diagram below shows the human digestive system. Study it carefully and answer the questions that follow



- i. Identify the parts labelled **I, II, III, IV** and **V**.
- ii. Identify the part where:
 - a. Absorption of nutrients takes place
 - β. Absorption of water takes place
 - γ. Faeces are stored
- iii. List two parts where digestion occurs.

(b) The set – up below is used to separate a mixture of cooking oil and water. Study it carefully and answer the questions that follow.



- i. State the name of the setup above.
 - ii. Name the parts labelled **X** and **Y**.
 - iii. What is the general name given to the mixture of cooking oil and water?
 - iv. Name two mixtures that can also be separated by the method above.
2. (a) Write two features of the following:
- | | | |
|------------|------------|----------|
| a. Insects | β. Mammals | γ. Birds |
|------------|------------|----------|
- (b) Give two examples each of
- | | | |
|------------|------------|----------|
| a. Insects | β. Mammals | γ. Birds |
|------------|------------|----------|
- (c) i. Define the following
- | | |
|---------------------|------------------------|
| a. Miscible liquids | β. Immiscible liquids. |
|---------------------|------------------------|
- ii. Give two examples each of
- | | |
|---------------------|------------------------|
| a. miscible liquids | β. Immiscible liquids. |
|---------------------|------------------------|
3. (a) i. Mention four daily cyclic movement activities in the environment.
 ii. State three bodies that are seen in the night sky.
- (b) i. Explain the term evapotranspiration.
 ii. Give four sources of water in the environment.
- (c) Give two importance each of the following parts of a plant:
- | | | |
|-----------|----------|-----------|
| i. Leaves | ii. Root | iii. Stem |
|-----------|----------|-----------|
4. (a) i. Briefly describe the formation of day and night on planet Earth.
 ii. Define the term water purification.
- (b) i. Give four characteristics of non-living things.
 ii. State three methods of purifying water.
- (c) i. Give three examples of reptiles.
 ii. State three characteristics of reptiles.


ONE VISION EXAMINATIONS CENTRE (OVEC)



(A Credible Private Examinations Group)

END OF FIRST TERM EXAMINATION - DEC.

RELIGIOUS AND MORAL EDUCATION

NAME OF PUPIL			
SIGNATURE			
CLASS	BASIC 4	DURATION	1 hour 40 minutes
INSTRUCTIONS	<p>SECTION A: Answer All Questions in this Section by shading the correct answer on your Objective Test answer sheet. Use 2B Pencil throughout. Shade like this </p> <p>SECTION B: This is the THEORY Part. It also contains other sub- divisions. Follow the instructions given before each part of this section. Answer this part in your Answer Booklet.</p> <p><i>Do not open this booklet until you are told to do so. While you are waiting, read and observe the instructions given above carefully. Write your Name and indicate your Signature in the spaces provided above.</i></p>		

1. Which of the following was the first to be made by God?

- A. Earth
- B. Plant
- C. Fish
- D. River

2. Select the action which takes place in humans, animals and plants.

- A. Thinking
- B. Shouting
- C. Growing
- D. Speaking

3. Which object gives light and heat to the world?

- A. Sun
- B. Firefly
- C. Star
- D. Moon

4. The grass eater among the list of animals is

- A. dog
- B. lion
- C. sheep
- D. snake

5. God gave the greatest power to control creation to

- A. plants
- B. mankind
- C. animals
- D. things

6. The main material used for making the object below is



- A. metal
- B. leather
- C. plastic
- D. fabric

7. What work did God do on the seventh day of creation?

- A. Creation
- B. Resting
- C. Building
- D. Moulding

8. The natural object seen in the sky at night is

- A. stone
- B. thunder
- C. star
- D. sun

9. The ability of a person to tell a story means he/she can

- A. sense
- B. growth
- C. walk
- D. speak

10. Which of the following is the largest source of water?

- A. Lake
- B. River
- C. Sea
- D. Well

11. The ability to know what is good and bad is only in

- A. plants
- B. trees
- C. humans
- D. animals


12. All the things created by God in the physical environment are

- A. artificial
- B. natural
- C. man made
- D. heavenly

13. Bush burning destroys the following things in the environment except

- A. houses
- B. plants
- C. animals
- D. air

14. Where does this animal live?



- A. At home
- B. On trees
- C. At forest
- D. In the sky

15. Too much dust and smoke in the atmosphere pollutes
- A. land
 - B. water
 - C. sound
 - D. air
16. Every Muslim performs the following action when praying except
- A. standing straight
 - B. dancing to songs
 - C. bending down
 - D. speaking words
17. All Christians pray because it is a command from
- A. themselves
 - B. their maker
 - C. angels
 - D. all spirit
18. Washing clothes and bathing in rivers pollute
- A. noise
 - B. air
 - C. water
 - D. land
19. Human beings get the following things from animals except
- A. meat
 - B. medicine
 - C. egg and milk
 - D. charcoal
20. The last Islamic daily prayer is performed at what time?
- A. Night
 - B. Dawn
 - C. Noon
 - D. Evening
21. What can Amadu do to protect his environment?
- A. Caring for animals
 - B. Galamsey
 - C. Bush burning
 - D. Open smoking
22. Muslims pray so that they can obtain blessings from
- A. gods
 - B. Angels
 - C. Allah
 - D. Mohammed
23. The National Anthem of Ghana is a
- A. party song
 - B. non-country song
 - C. religious song
 - D. non-religious song
24. Which of the following creatures of God can create new things?
- A. Plants
 - B. Humans
 - C. Animals
 - D. Angels
25. Which people believe in prayer said to smaller gods?
- A. Muslims
 - B. Traditionalists
 - C. Christians
 - D. Atheists
26. All gospel musicians make
- A. french songs
 - B. non-country songs
 - C. religious songs
 - D. non-religious songs
27. The worship of ancestors and chanting are practices of
- A. Traditionalists
 - B. Muslims
 - C. Christians
 - D. Buddhists
28. Who leads Islamic prayers?
- A. Fetish Priest
 - B. Imam
 - C. Church elder
 - D. Chief
29. Before prayer, all Muslims
- A. wash their bodies
 - B. eat good foods
 - C. read the Qur'an
 - D. give out gifts
30. People sing non-religious songs during the following occasions except
- A. church service
 - B. naming ceremony
 - C. funeral rites
 - D. dance shows

SECTION B

[40 MARKS]

Answer **all** questions.

1. (a) Give the part of the environment that is polluted in each case.
- i. Smoking cigarettes at the market;
 - ii. Continuous sand winning;
 - iii. Fishing with chemicals;
 - iv. Galamsey activities. **[8 marks]**
- (b) Give two activities of mankind that preserve the environment. **[6 marks]**
- (c) List any three things human beings get from animals and plants. **[6 marks]**

2. (a) Using the table, group the following objects under the religious group that uses them. **[9 marks]**

Qur'an Calabash Cross Prayer mat Alcohol
Bible Powder Pulpit Plastic kettle

Christianity	Islam	Traditional

- (b) Give three things that humans can do but animals cannot do. **[6 marks]**
- (c) Name the two main types of songs we have. **[5 marks]**


ONE VISION EXAMINATIONS CENTRE (OVEC)



(A Credible Private Examinations Group)

END OF FIRST TERM EXAMINATION - DEC.

HISTORY


NAME OF PUPIL			
SIGNATURE			
CLASS	BASIC 4	DURATION	1 hour 40 minutes
INSTRUCTIONS	<p>SECTION A: Answer All Questions in this Section by shading the correct answer on your Objective Test answer sheet. Use 2B Pencil throughout. Shade like this </p> <p>SECTION B: This is the THEORY Part. It also contains other sub- divisions. Follow the instructions given before each part of this section. Answer this part in your Answer Booklet.</p> <p><i>Do not open this booklet until you are told to do so. While you are waiting, read and observe the instructions given above carefully. Write your Name and indicate your Signature in the spaces provided above.</i></p>		

1. The Ewes in Ghana are mostly referred to as
 - A. Akans
 - B. Anlos
 - C. Awoyo
 - D. Awusi
2. Kofi travelled to Tamale to see beautiful places. This journey is called
 - A. appreciation
 - B. messaging
 - C. planning
 - D. excursion
3. By reading old Ghanaian books and newspapers, we learn
 - A. travelling
 - B. memory
 - C. history
 - D. prayer
4. Jamestown Lighthouse is a historical location in
 - A. Ashanti Region
 - B. Eastern Region
 - C. Greater Accra Region
 - D. Volta Region
5. Who was a leader of the Gonja people?
 - A. Osei Tutu
 - B. Ntim Gyakari
 - C. Okomfo Anokye
 - D. Ndwura Jakpa
6. The popular mosque in Ghana visited by travellers is in
 - A. Ashanti
 - B. Upper East
 - C. Northern
 - D. Volta
7. Which people in Ghana speak Twi?
 - A. Ga
 - B. Dagomba
 - C. Asante
 - D. Ewe
8. The capital of Western North Region is
 - A. Nalerigu
 - B. Wiawso
 - C. Techiman
 - D. Dambai
9. The Denkyira kingdom declined in the year
 - A. 1701
 - B. 1874
 - C. 1957
 - D. 2025
10. Yaa Naa is a traditional title given to the ruler of
 - A. Dagbon kingdom
 - B. Asante kingdom
 - C. Ewe kingdom
 - D. Frafra kingdom
11. The Savannah belt states include the
 - A. Gonjas
 - B. Asantes
 - C. Ewes
 - D. Fantes
12. The Asante Kingdom in 1874 were defeated by the
 - A. Danes
 - B. British
 - C. Italians
 - D. Germans
13. Many states expanded their boundaries through tribal
 - A. messages
 - B. wars
 - C. sounds
 - D. deaths
14. A historical site in Ghana that shares a boundary with the sea is
 - A. Jubilee House
 - B. Burma Camp
 - C. Gbewaa Palace
 - D. Elmina Castle
15. Which of the following is a primary source of history?
 - A. Play
 - B. Picture
 - C. Book
 - D. Movie
16. Which of the following historical sites is not in the Greater Accra Region?
 - A. Jubilee House
 - B. Burma Camp
 - C. James Town Lighthouse
 - D. Gbewaa Palace

17. In which region can Lake Bosomtwe be found?

- A. Ashanti
- B. Volta
- C. Savannah
- D. Eastern

18. Identify the historical site below.



- A. Flagstaff House
- B. Burma Camp
- C. Larabanga Mosque
- D. Gbewaa Palace

19. GBC stands for

- A. Ghana Broadcasting Corporation
- B. Ghana British College
- C. Ghana Bible Company
- D. Ghana Broadcasting Camp

20. The Okomfo Anokye sword Site is in

- A. Takoradi
- B. Koforidua
- C. Kumasi
- D. Sunyani

21. What brought people from other kingdoms together?

- A. Marriage
- B. Farming
- C. Information
- D. Locations

22. What serves as a symbol of unity for the people of the Asante Kingdom?

- A. Military presence
- B. Gold Mines
- C. Golden stool
- D. Kente

23. A product from the Savannah belt of Ghana is

- A. smoked fish
- B. smock
- C. kente
- D. gin

24. Which people can be located in the forest belt zone?

- A. Gonja
- B. Grusi
- C. Ga
- D. Bono

25. Mrs. Ansah is not a traditional job worker. She may likely be a

- A. farmer
- B. fisher
- C. nurse
- D. weaver

26. An example of a printed source of history is

- A. old film
- B. videotape
- C. newspaper
- D. old bottles

27. History is learnt in schools to

- A. find out the ages of people
- B. know the culture of tribes
- C. buy and read books
- D. know future stories

28. Which people can be located in Southern Ghana?

- A. Frafras
- B. Bonos
- C. Asantes
- D. Fantes

29. An example of a source of history that is a song is

- A. dirge
- B. letter
- C. picture
- D. basket

30. All the following tribes are part of the Akan group except

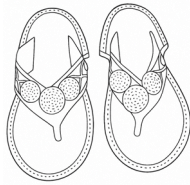
- A. Asante
- B. Bono
- C. Gonja
- D. Fante

SECTION B

[40 MARKS]

Answer **all** questions.

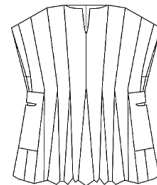
1. (a) Write down the names of the following historical items.



A



B



C



D

[8 marks]

(b) Write the people who use the following historical locations in Ghana.

**President of Ghana
Muslims**

**Dagbon Chief
Asantehene**

Soldiers

- i. Gbewaa Palace;
- ii. Larabanga Mosque;
- iii. Manhyia Palace;
- iv. Jubilee House;
- v. Burma Camp.

[10 marks]

(c) Give two reasons why it is important to study history.

[4 marks]

2. (a) Write the source of history from the list which can provide the following information;

Dirge

Funeral brochure

Newspapers

Kente

Old picture

- i. The life story of a dead person;
- ii. The story of a disaster that occurred in 1985;
- iii. How a man looked when he was young;
- iv. The colours of traditional clothes;
- v. The words of a traditional song.

[10 marks]

(b) Copy and complete the table by grouping the following tribes into the vegetation zone they belong to

Bono

**Gonja
Effutu**

**Fante
Ga**

**Denkyira
Dagomba**

Mamprusi

Vegetation zones	Two tribes
Coastal Belt States	
Forest Belt States	
Savannah Belt Zones	

[8 marks]


ONE VISION EXAMINATIONS CENTRE (OVEC)



(A Credible Private Examinations Group)

END OF FIRST TERM EXAMINATION - DEC.

COMPUTING

NAME OF PUPIL			
SIGNATURE			
CLASS	BASIC 4	DURATION	1 hour 40 minutes
INSTRUCTIONS	<p>SECTION A: Answer All Questions in this Section by shading the correct answer on your Objective Test answer sheet. Use 2B Pencil throughout. Shade like this </p> <p>SECTION B: This is the THEORY Part. It also contains other sub- divisions. Follow the instructions given before each part of this section. Answer this part in your Answer Booklet.</p> <p><i>Do not open this booklet until you are told to do so. While you are waiting, read and observe the instructions given above carefully. Write your Name and indicate your Signature in the spaces provided above.</i></p>		

1. An instruction or a program on the computer is called
 - A. hardware
 - B. liveware
 - C. software
 - D. proware
2. External hardware components connected to a computer but are not essential for its basic operation are called
 - A. hardware
 - B. peripherals
 - C. system unit
 - D. software
3. EDVAC, UNIVAC, and IBM 701 are all types of the generation of computers.
 - A. fifth
 - B. sixth
 - C. third
 - D. first
4. Which of the following devices can Matthew use to type his history assignment?
 - A. Mouse
 - B. Light Pen
 - C. Keyboard
 - D. Joystick
5. The part of the computer that temporarily stores data and instructions needed for processing is called
 - A. diskette
 - B. hard disk
 - C. pen drive
 - D. memory
6. Which type of memory loses its contents when the computer is turned off?
 - A. Non-volatile memory
 - B. Read Only Memory
 - C. Volatile memory
 - D. Old memory
7. The smallest unit of data in a computer is known as
 - A. bytes
 - B. gigabytes
 - C. bits
 - D. kilobytes
8. How many keys does the standard keyboard have?
 - A. 104
 - B. 140
 - C. 100
 - D. 125
9. A special key on computer keyboards used to close or cancel an operation is the
 - A. Alt key
 - B. Ctrl key
 - C. Del key
 - D. Esc key
10. Which of the following devices would be the best to play a computer game with?
 - A. Mouse
 - B. Joystick
 - C. Microphone
 - D. Keyboard
11. How many bits make one byte?
 - A. 8
 - B. 5
 - C. 6
 - D. 7
12. Some examples of peripheral devices include all the following except
 - A. joy stick
 - B. printer
 - C. memory card
 - D. system unit
13. Which of the following memory stores data permanently?
 - A. RIM
 - B. RAM
 - C. RUM
 - D. ROM
14. The typing area of the keyboard is divided into the home row, top row and keys.
 - A. middle row
 - B. left row
 - C. bottom row
 - D. upper row
15. The QWERTY keys of the keyboard are found on the
 - A. left row
 - B. home row
 - C. top row
 - D. middle row

16. A digital filing cabinet used to organise files and other documents on a computer is called
- A. potholder
 - B. digital container
 - C. cupboard
 - D. folder
17. How many generations of computers do we have in history?
- A. 3
 - B. 5
 - C. 2
 - D. 4
18. A set of keys on a standard keyboard that serve as a reference point for finger placement while typing is the
- A. home row keys
 - B. middle row keys
 - C. bottom row keys
 - D. upper row keys
19. How can you quickly launch your favourite computer game without using the Start menu?
- A. Pin the game to the taskbar
 - B. Pin the game to the title bar
 - C. Pin the game to the desktop
 - D. Pin the game to the start menu
20. Which of the following generations of computers uses vacuum tubes?
- A. First
 - B. Second
 - C. Third
 - D. Fourth
21. The main workspace on a computer screen where you can access files, folders, and applications is known as
- A. wallpaper
 - B. desktop
 - C. background
 - D. monitor
22. The colourful background that you see on the desktop is known as
- A. wallpaper
 - B. picture
 - C. wall chart
 - D. desktop
23. The graphical representation of programs, files and folders on the computer is known as
- A. taskbar
 - B. folder
 - C. icon
 - D. file
24. A small rectangle window that the computer uses to communicate with the computer user is known as
- A. property box
 - B. dialog box
 - C. question box
 - D. pop-up box
25. The start button can be found on the of the computer.
- A. bottom right corner
 - B. upper left corner
 - C. upper right corner
 - D. bottom left corner
26. Another name given to the system tray is the
- A. notification area
 - B. task pane
 - C. windows icon
 - D. taskbar
27. All deleted files are stored in the of the computer.
- A. recycle bin
 - B. computer bin
 - C. desktop bin
 - D. folder bin
28. The horizontal bar that is usually displayed at the bottom of the desktop is the
- A. task bar
 - B. icon bar
 - C. file bar
 - D. title bar
29. The primary input device of the computer is
- A. joystick
 - B. scanner
 - C. keyboard
 - D. system unit
30. The process of starting the execution of a program, application, or task is called
- A. go-live
 - B. command
 - C. starting
 - D. launching

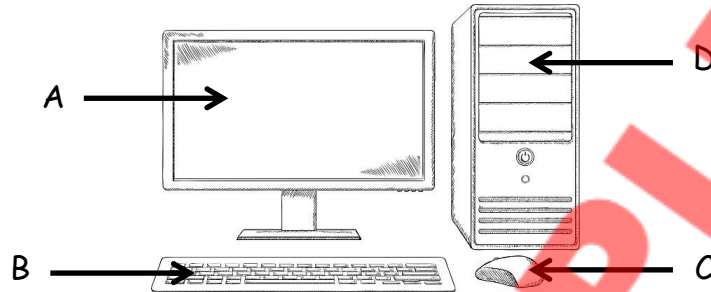
SECTION B

[40 MARKS]

This section consists of **two** parts: **Part I** and **II**. Answer **all** questions in **Part I** and any other **two** from **Part II**.

PART I : Compulsory

1. Study the diagram below and answer the questions that follow:



- (a) What name is given to the setup above? [2 marks]
(b) Identify the parts labelled A – D. [8 marks]

PART II: Answer any two questions from this part

2. (a) State **two** differences between **RAM** and **ROM**. [8 marks]
(b) Your school is organising a field trip to the Adomi Bridge along the Volta River. You are excited to take photos and record videos to save on your computer and share with a friend abroad.

Name:

- i. **one** device that you can use to take the pictures. [2 marks]
ii. **one** device that you can use to record the video. [2 marks]
(c) What do you understand by *personalising the desktop*? [3 marks]
3. (a) What is a *folder*? [2 marks]
(b) Create a folder named "My Assignment" on your desktop and move your Word documents into it. Rearrange the following to create the folder.
i. Select the folder from the New menu that appears.
ii. Name the folder "My Assignment" and press the Enter key.
iii. Choose New from the menu.
iv. Drag and drop the Word documents in the folder created.
v. Right-click on an empty space on your desktop to display a sub-menu. [10 marks]
(c) State **three** importance of renaming a folder. [3 marks]
4. (a) Define *peripheral devices*. [3 marks]
(b) Mention **three** examples of peripheral devices. [6 marks]
(c) Write **three** facts about the first generation of computers. [6 marks]


ONE VISION EXAMINATIONS CENTRE (OVEC)



(A Credible Private Examinations Group)

END OF FIRST TERM EXAMINATION - DEC.

CREATIVE ARTS

NAME OF PUPIL			
SIGNATURE			
CLASS	BASIC 4	DURATION	1 hour 40 minutes
INSTRUCTIONS	<p>SECTION A: Answer All Questions in this Section by shading the correct answer on your Objective Test answer sheet. Use 2B Pencil throughout. Shade like this </p> <p>SECTION B: This is the THEORY Part. It also contains other sub- divisions. Follow the instructions given before each part of this section. Answer this part in your Answer Booklet.</p> <p><i>Do not open this booklet until you are told to do so. While you are waiting, read and observe the instructions given above carefully. Write your Name and indicate your Signature in the spaces provided above.</i></p>		

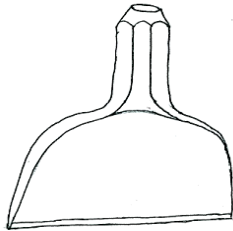
- The physical things in our environment made by God can be
 - seen
 - heard
 - read
 - walked

- The object below is an example of which art?
 - Natural
 - Social
 - Artificial
 - Windy



- Shading and drawing on sheets of paper can be done with
 - blade
 - phone
 - pencil
 - ruler

Use the picture below to answer questions 4 and 5.



- The element seen in the picture is
 - dots
 - colours
 - lines
 - cuts
- The designed object forms part of
 - performed artworks
 - visual artworks
 - natural artworks
 - image artworks
- The elements used for creating designs are from animals except
 - bone
 - leather
 - feather
 - plastic
- The material for making clothes in Ghana is
 - leather
 - thread
 - wire
 - glass

- Rainbows have the following colours except
 - red
 - black
 - green
 - yellow

- We can get information about artworks from the following places except
 - library
 - internet
 - animals
 - people

Use the picture below to answer questions 10 to 12.



- What type of art is shown in the picture?
 - Performing art
 - Visual art
 - Music art
 - Drawing art
- The material being used is
 - stone
 - chalk
 - clay
 - foam
- The process shown in the picture is
 - pulling
 - coiling
 - cutting
 - ringing
- How many colours are in the flag of Ghana?
 - Two
 - Three
 - Four
 - Five
- Which of the following is not a dance movement?
 - Squatting
 - Bending
 - Jumping
 - Sleeping

15. Lines, dots and colours are used to create

- A. voices
- B. songs
- C. objects
- D. sounds

16. An object that produces sound in a musical display is

- A. clothes
- B. whistle
- C. needle
- D. mouse

17. The colour of funeral clothes in our communities is

- A. black
- B. white
- C. brown
- D. green

18. Select the material that can be used for colouring.

- A. Clay
- B. Eraser
- C. Crayon
- D. Folded paper

19. Which of the following is done to make an object beautiful?

- A. Joining
- B. Painting
- C. Sharing
- D. Cutting

20. The way of life of people includes their food, dressing, and

- A. rocks
- B. river
- C. dance
- D. firewood

21. The elements in the design below include the following except



- A. line
- B. dot
- C. shape
- D. hair

22. Clothes worn for art performances are termed as

- A. jerseys
- B. costumes
- C. fabrics
- D. uniforms

23. Which of the following artworks can be displayed by hanging?

- A. Bag and shirt
- B. Chair and shoe
- C. Net and bed
- D. Basket and car

24. The outline below shows a pattern of



- A. shapes
- B. colours
- C. lines
- D. forms

25. What is the general name given to a ruler and tape measure?

- A. Cutting tools
- B. Carving tools
- C. Modelling tools
- D. Measuring tools

26. A microphone is used for performing

- A. toys
- B. picture
- C. dance
- D. music

27. How can you know the favourite artwork of your friends?

- A. Looking at them
- B. Asking them
- C. Sharing their money
- D. Playing with them

28. The top of a teacher's table looks is a

- A. square
- B. rectangle
- C. rhombus
- D. circle

29. Kofi Kinaata is well known in which Ghanaian industry?

- A. Poem
- B. Drama
- C. Music
- D. Acrobatics

30. When a boy joins lines on a wall with chalk, what would be formed?

- A. Flats
- B. Shapes
- C. Sides
- D. Paintings

SECTION B

[40 MARKS]

Answer **all** questions.

1. In the spaces provided below, draw and colour the following items.

New moon	Star

[10 marks]

2. Asana wants to make drawings and paintings at home and school. List five surfaces she can use. [10 marks]

3. Using the table, group the following art actions under those that produce sound and those that produce no sound.

Singing, Drawing, Shading, Drumming,
Dancing, Acting movie, Reciting, Painting

Produce sound	Produce no sound

[12 marks]

4. Give four things people wear when they are performing traditional Ghanaian dance. [8 marks]

ONE VISION EXAMINATIONS CENTRE (OVEC)



END OF FIRST TERM EXAMINATION - DEC.

**GHANAIAN LANGUAGE
(ASANTE TWI)**

BASIC 4

1 hour 40 minutes

PRINT IN BLOCK LETTERS

Name: _____
Surname Other Names

Date: _____ **Signature:** _____

OBJECTIVE TEST

Kenkan anwɔnsɛm tiawa yi na bua nɛmmisa 1 – 10.

Agya Kwaa Paa kɔɔ apam
Akɔpam apam, apam,
Akɔpam atena ɔpam ase
Agye n'ahome ɔpam no ase
Ɔpam ase na nwumu wɔ

Agya Kwaa Paa agyae apam
Wahunu mampam bi
Agyae n'apam no
Mampam no aforo ɔpam
Ɔpam no mman no apan

Ɔmampam ate ahwe
Agya Kwaa Paa ani agye
Ne yerenom mmienu seresere
Ne mma nsia nso seresere
Mampam no aye nam
Ɔho no apa so.

1. Agya Kwaa Paa kɔyɛɛ deɛn wɔ
nwiram hɔ?
A. Ɔkɔsra n'adamfo
B. Ɔkɔduaa nnɔbaɛɛ
C. Ɔkɔdii nsekuro
D. Ɔkɔɔ apam
2. Dua bɛn na Agya Kwaa Paa
kɔgyɛɛ n'ahome wɔ aseɛ?
A. Sapele
B. Ɔpam
C. Odum
D. Mahogany
3. Aboa bɛn na Agya Kwaa Paa
kɔpamoo no?
A. Ɔtwe
B. Dabobabo
C. Akyekyedee
D. Mampam

4. Ɔpam no ase na wo.
 A. nsuo
 B. ɔhyew
 C. onwunu
 D. owia
5. Adɛn nti na Agya Kwaa Paa gyaee apam?
 A. Ɔhunuu ɔwɔ
 B. Ɔhunuu ɔsebo
 C. Ɔhunuu mampam
 D. Ɔhunuu ɔkɔtɔ
6. Edeɛn na eyee ɔmampam no?
 A. Ɔte hweeɛ
 B. Ɔtu kɔeɛ
 C. Ɔdaeɛ
 D. Ɔhurihuriiɛ
7. Tebea bɛn na Agya Kwaa Paa wo mu?
 A. Awerɛhoɔ
 B. Ateetee
 C. Anigyee
 D. Aboobo
8. Agya Kwaa Paa wɔ yerenom sɛn?
 A. Nsia
 B. Enum
 C. Mmiensa
 D. Mmienu
9. Agya Kwaa Paa wɔ mma
 A. nwɔtwe
 B. nsia
 C. nkron
 D. ɛnan
10. Anwonsɛm no wɔ nkyekyɛmu
 A. du-nson
 B. mmiensa
 C. du
 D. mmienu
11. Dwom bɛn nie, Abena Agyeiwaa deɛ, ɔmpɛsu..!
 A. Buronya dwom
 B. Agyie ase dwom
 C. Abagyegyee dwom
 D. Nnwonkorɔ nwom
12. Sɛ ɔbɔmmɔfoɔ rekɔ ahayɔ a, nnipa ɔdi n'akyi kɔ din de
 A. nsɛntwerɛni
 B. anwonofɔɔ
 C. ɔyawni
 D. ɔkasamafoɔ
13. Nnipakuo yi mu baako kɔ ahayɔ wɔ ɛpo so.
 A. Ɔfareni
 B. Ɔbetwani
 C. Ɔkuani
 D. Ɔtomfo
14. Sɛ obi reyɛ adwuma na ɔto nnwom a, ɛma no
 A. yɛ mmɔbo
 B. nkanyan
 C. awerɛhoɔ
 D. yɛ ha
15. "Kro hi kro,...." nso yɛ dwom.
 A. aparefoɔ
 B. kentenwonofɔɔ
 C. kentenwonnofoɔ
 D. ahayɔ
16. Eberɛ bɛn na yɛto anasesɛm?
 A. Anɔpa
 B. Ahemakye
 C. Awia
 D. Anadwo
17. Aboa bɛn na ɛtaa di akotene wɔ anansesɛmtɔɔ mu?
 A. Nwa
 B. Dɛnkyɛm
 C. Ɔsono
 D. Ananse
18. Nkyekyɛmu dodoɔ sɛn na ɛwɔ anansesɛm mu?
 A. ɛnan
 B. Enum
 C. Mmiensa
 D. Nsia
19. Atwerɛdeɛ dodoɔ sɛn na ɛwɔ asɛmfua "pɛsɛmenkomenya" mu?
 A. Du-nan
 B. Du-nson
 C. Nwɔtwe
 D. Nsia
20. Prako gyina hɔ ma wɔ anansesɛm mu.
 A. ayamye
 B. ɔhene
 C. efi
 D. ananse ba

**Fa adeyɔ asemfua a wɔasensane
aseɛ no kɔ ensiie kabea mu.**

21. Ɔpetɛ no ɔi dua no so.
A. Asi
B. Bɛsi
C. Resi
D. Sii
22. Ama kɔɔ sukuu.
A. Bɛkɔ
B. Akɔ
C. Kɔ
D. Reɔ
23. Lore no yɛ tan.
A. Yɛɛ
B. Bɛyɛ
C. Ayɛ
D. Reyɛ
24. Sukuuni no twerɛ nwoma mu.
A. Retwerɛ
B. Atwerɛ
C. Twerɛɛ
D. Bɛtwerɛ
25. Owusu di bayerɛ.
A. Bɛdi
B. Adi
C. Redi
D. Diɛ

**Hwehwɛ ɔkasamu a wɔde
atwerɛdeɛ akɛseɛ atwerɛ no yie.**

26. A. asuo pra so yie.
B. Asuo Pra so yie.
C. asuo Pra so yie.
D. Asuo Pra so Yie.
27. A. Me papa firi Tamale.
B. me Papa firi tamale.
C. Me papa Firi Tamale
D. Me Papa Firi Tamale
28. A. Efiada yɛ Kofi awoda.
B. efiada yɛ Kofi awoda.
C. Efiada yɛ kofi Awoda.
D. efiada yɛ Kofi Awoda.
29. A. wo maame din de sɛn?
B. wo Maame din De Sɛn?
C. Wo maame din de sɛn?
D. Wo Maame Din de sɛn?
30. A. Akosua bɛkɔ hɔ Obubuo mu.
B. Akosua bɛkɔ hɔ obubuo mu.
C. akosua bɛkɔ hɔ obubuo mu.
D. Akosua bɛkɔ Hɔ Obubuo mu.

SECTION B

[40 MARKS]

Bua nsɛmmisa a ɛwɔ ɔfa yi **nyinaa**.

COMPOSITION

1. Yi nea **edidisɔ** yi mu baako fa nsɛmfua a ɛnsua nsene ɔha (100) twerɛ baako ho asem.
- a. Twerɛ wo ho asem.
- b. Twerɛ efie aboa a w'ani gye ne ho.
- c. Twerɛ agorɔ a wopɛ ho asem.

COMPREHENSION

Ɛberɛ a Opoku gyeɛ Abate ne Ali no, ɔhyɛ wɔn bɔ sɛ ɔbɛhwɛ wɔn so yie. Ɔsane hyɛ wɔn bɔ sɛ ɔne wɔn bɛtena asomdwoeɛm. Abate ne Ali abusuafoɔ tuu wɔn fo wɔ nnoɔma a ɛsɛ sɛ wɔyɔ ne deɛ enɛ sɛ wɔyɔ. Abate ne Ali antie abusuafoɔ no asem. Wɔyɔɔ nnoɔma a wɔka kyerɛ wɔn sɛ nɛ sɛ wɔyɔ nko ara. Adeɛ titire a na saa mmɔfra yi pɛ pa ara ne sɛ wɔbɛhwɛhwɛ nwa wɔ nwiram.

Ɛberɛ bi, Opoku pue kɔɔ nhyiamu bi a na ɛho hia pa ara. Ansa na ɔrekɔ no, ɔka kyerɛ Abate ne Ali sɛ, ɔmpɛ sɛ wɔbɛkɔ nwiram akɔpɛ nwa. Ɔkyɛ wɔ nhyiamu no ase yie. Ɔbɛduruu fie anwummerɛ nnoɔwɔtwe ne fa. Ɛberɛ a ɔduruu fie no na mmarima baanu yi mu biara nni fie. Sɛdeɛ na osuo atɔ no maa nwa baa pa ara. Yei bɛyɛ nsɔhwɛ kɛsɛɛ maa Abate ne Ali. Mmerɛ kakra no, ɔwosoo ne ti ɛnna ɔsɔɔ akasanoma sɛ ɔretie kaseɛbɔ. Kaseɛbɔ mu no, ɔtee sɛ keteke bi afa mmɔfra num bi so a na wɔkuta nwa.

Saa kaseɛbɔ yi maa Opoku ho dwirii no a wanhunu mpo sɛ Ali abɛwura dan no mu. Ali na ɔrete mfifire yi. Ɛhefa na Abate wɔ? Ankyɛ koraa na Abate nso bɛwuraa dan no mu a ɔno nso rete mfifire.

1. Hwanom na Opoku gyeɛ wɔn sɛ ɔbɛhwɛ wɔn no?
2. Afotuo bɛn na Abate ne Ali abusuafoɔ de maa wɔn no?
3. Opoku rekɔ nhyiamu no, asem bɛn na ɔka kyerɛ Ali ne Abate?
4. Ɛberɛ bɛn na Opoku firii nhyiamu no baa fie?
5. Wogyɛ di sɛ adwene bɛn na ɛbaa Opoku tirim bɛɛ a ɔtee sɛ keteke bi akum mmɔfra bi no?

LEXIS AND STRUCTURE

*Twɛrɛ ɔkasamu a ɛdidisoɔ yi nyinaa bio na fa **atwɛrɛ mu agyinagyɛdeɛ** hyehyɛ baabi a ɛfata ma ebiara ntɔ asomu.*

- (a) Worekɔ ɛhefa
- (b) Gyae
- (c) Owura no bɛkɔ Atonsɔ Obuase Tanɔ ne Santasi
- (d) Adwoa yɛ dwontoni
- (e) Yɛ dinn
- (f) Ɔredidi anaa
- (g) Efiɛ no yɛ kɛsɛɛ
- (h) Mɛkan Abɛbrɛsɛ Forosie ne Obede nwoma no
- (i) Ne papa din de sɛn
- (j) Aboa no mu yɛ duru


ONE VISION EXAMINATIONS CENTRE (OVEC)



(A Credible Private Examinations Group)

END OF FIRST TERM EXAMINATION - DEC.

FRENCH LANGUAGE

NAME OF PUPIL			
SIGNATURE			
CLASS	BASIC 4	DURATION	1 hour 40 minutes
INSTRUCTIONS	<p>SECTION A: Answer All Questions in this Section by shading the correct answer on your Objective Test answer sheet. Use 2B Pencil throughout. Shade like this </p> <p>SECTION B: This is the THEORY Part. It also contains other sub- divisions. Follow the instructions given before each part of this section. Answer this part in your Answer Booklet.</p> <p><i>Do not open this booklet until you are told to do so. While you are waiting, read and observe the instructions given above carefully. Write your Name and indicate your Signature in the spaces provided above.</i></p>		

SECTION A

[60 MARKS]

Read the passage below and answer the questions that follow.

L'enseignante Abigail Amponsah.

Madame Abigail Amponsah est une jeune femme. Elle a trente-trois ans. Elle est grosse et grande. Abigail a un teint noir. Elle est très belle. Elle a une petite tête rectangulaire avec des cheveux noirs.

Madame Abigail enseigne l'anglais au CE2.

1. Comment s'appelle le professeur?
A. Madame
B. Abigail Amponsah
C. L'enseignante
2. Quelle est la profession de madame?
A. Elle est professeur
B. Elle est belle
C. Est noire
3. Quel est son âge?
A. 25
B. 22
C. 33
4. Comment est sa taille?
A. Grosse
B. Petite
C. Grande
5. Elle a une forme
A. grosse
B. gros
C. grande
6. Quel est son teint?
A. Noir
B. Clair
C. Rouge
7. Comment est madame Abigail?
A. Belle
B. Beau
C. Belles
8. Qu'est-ce qui est noir?
A. Les cheveux
B. La tête
C. Le ventre
9. Quelle matière enseigne madame?
A. Le Twi
B. Le français
C. L'anglais
10. Quelle classe enseigne-t-elle?
A. CE1
B. CE2
C. CM2

Identify the images below in French.

11.



- A. Mon père
- B. Ma mère
- C. Une famille

12.



- A. Un livre
- B. Un livre noir
- C. Un livre bleu

13.



- A. Une poupée
- B. Une règle
- C. Un cahier

14.



- A. Un lion
- B. Un ordinateur
- C. Un car

15.



- A. Une école
- B. Une mosquée
- C. Une église

16.



- A. Un téléphone
- B. Un ordinateur
- C. Un casque

Choose the correct answer from the options lettered A-C to complete sentences below.

17. Voici mère, elle est belle.

- A. Mon
- B. Ma
- C. Mes

18. parents sont en Europe.

- A. Mon
- B. Ma
- C. Mes

19. Voici voiture de papa.

- A. le
- B. la
- C. les

20. chaises sont dans la classe.

- A. Le
- B. L'
- C. Les

21. J'..... un stylo.

- A. ai
- B. a
- C. as

22. Elle infirmière.

- A. suis
- B. es
- C. est

23. Les élèves vont

- A. au marché
- B. à l'école
- C. au jardin

24. Comment tu t'appelles?

- A. Je m'appelle Haruna Iddrisu
- B. Elle s'appelle madame Comfort
- C. Tu t'appelles Fatimah Fuseini

25. enseigne les apprenants.

- A. Le docteur
- B. Les gens
- C. Le professeur

Choose the correct meaning of the words below.

26. La tête

- A. Head
- B. Ear
- C. Heard

27. La langue

- A. Tooth
- B. Tongue
- C. Mouth

28. Mouth

- A. Le nez
- B. L'oreille
- C. La bouche

29. Knee

- A. Le genou
- B. La bouche
- C. La cuisse

30. Leg

- A. La jambe
- B. Le pied
- C. La main

SECTION B

[40 MARKS]

Answer **all** questions.

1. Answer the following greetings in French. **[20 marks]**

- (a) Comment ça va?
- (b) Comment allez-vous?
- (c) Comment vas-tu?
- (d) Comment te portes-tu?
- (e) Comment **vous** vous portez?

2. Conjugate "être en classe ce matin" in present tense. **[20 marks]**

Exemple : Je suis en classe ce matin.