

ONE VISION EXAMINATIONS CENTRE (OVEC)



(A Credible Private Examinations Group)

END OF FIRST TERM EXAMINATION - DEC.

ENGLISH LANGUAGE

1 hour 40 minutes

NAME OF PUPIL			
SIGNATURE		Question no.	Marks
CLASS	BASIC 1		
INSTRUCTIONS	1. Write your name and indicate your signature in the spaces provided above.		
	2. Answer the questions as stated by the instructions given before each section.		
	3. Your teacher will guide you to understand the questions before you start.		
	TOTAL		

From the options lettered A to C, select the action words to complete the sentences.

1. The lady once every day.
A. cook
B. cooks
C. were cooking
2. The bat a mammal.
A. were
B. have been
C. is
3. This scissors blunt.
A. is
B. are
C. were
4. Both coaches well nowadays.
A. are doing
B. is doing
C. was doing
5. Why he sleep here?
A. do
B. does
C. don't
6. Children to play in the sand.
A. loves
B. is been loving
C. love
7. Mother the prayers today.
A. is leading
B. lead
C. have led
8. Your room dark.
A. is turning
B. have turned
C. turn
9. The tree water through the leaves.
A. lose
B. loses
C. are losing
10. He us whenever he is in trouble.
A. call
B. calls
C. have called
11. The chief his people on Sundays.
A. meet
B. meets
C. met
12. Your sisters for you.
A. is looking
B. was looking
C. are looking
13. June the sixth month of the year.
A. have been
B. is
C. were

14. The men the leaders of the home.

- A. is
- B. was
- C. are

15. One of my fathers dead.

- A. are
- B. is
- C. have been

From the options lettered A to C, select the right name for the items below.

16. This is a



- A. cup
- B. crown
- C. hat

17. That is a



- A. door
- B. house
- C. chair

18. These are



- A. watches
- B. boxes
- C. shapes

19. This is a



- A. cup
- B. shirt
- C. cap

20. That is a



- A. box
- B. shape
- C. house

SECTION B

Answer **all** questions.

Rewrite the sentences below with the right capitalization.

1. Mrs. badu is a nurse.

2. He travelled to tamale.

3. ama and agbovi are my friends.

4. mr. Anthony listens to us.

5. She just came from Kumasi.

SECTION C

Read the passage below carefully and answer the questions that follow.

Stephen asked his parents to get him a shiny red bicycle on his 7th birthday.

On his birthday morning, he woke up and saw a box in the living room.

His parents said, "Open it!" Stephen saw the bike he had requested in the big box. He hugged his parents and quickly put on his helmet to take a ride. He spent the whole day riding the bicycle with his friends.

That night, he said to himself, "This is the best birthday ever!"

(a) What did Stephen wish for his birthday?

(b) How old will Stephen be on his upcoming birthday?

(c) What did Stephen do to his parents when he saw the gift in the box?

(d) What did he do to the gift in the box?

(e) How did he describe his birthday?

ONE VISION EXAMINATIONS CENTRE (OVEC)



(A Credible Private Examinations Group)

END OF FIRST TERM EXAMINATION - DEC.

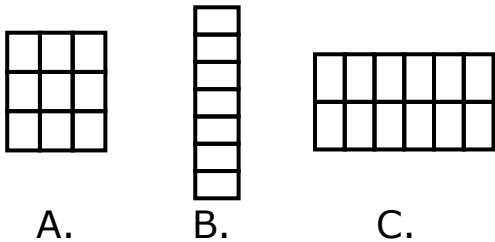
MATHEMATICS

1 hour 40 minutes

NAME OF PUPIL			
SIGNATURE		Question no.	Marks
CLASS	BASIC 1		
INSTRUCTIONS	1. Write your name and indicate your signature in the spaces provided above.		
	2. Answer the questions as stated by the instructions given before each section.		
	3. Your teacher will guide you to understand the questions before you start.		
	TOTAL		

Read each question carefully and choose the correct option from lettered A, B and C.

1. Select the group with most number of blocks.



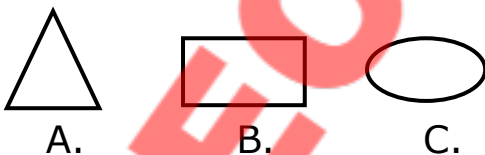
2. How many lines do the shapes below have?



3. Which 3D object has a round face?

- A. Fridge
- B. Cup
- C. Chair

4. Which shape looks like an egg?



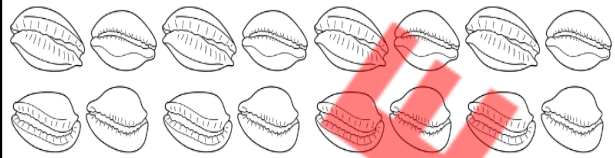
5. If one eraser costs 50 pesewas, find the cost of 2 erasers.

- A. 80 pesewas
- B. GH¢ 1.00
- C. GH¢ 2.00

6. The number forty-six is more than

- A. forty-four
- B. forty-eight
- C. fifty

7. Count and select the number of objects.



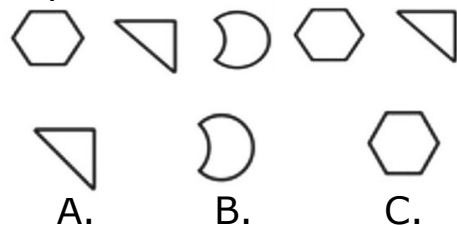
- A. 14
- B. 15
- C. 16

8. Which of the following faces does the 2D shape show?



- A. Square
- B. Circle
- C. Box

9. If the pattern is continued, what will be the next shape?



10. Which symbol is the fifth in the pattern below?

Σ Ω \varnothing Π Φ $\bar{\cup}$

- A. \varnothing
- B. $\bar{\cup}$
- C. Φ

11. Which of the following number statements is correct?

- A. $20 < 30$
- B. $21 > 22$
- C. $23 = 25$

12. The number 81 is written in words as

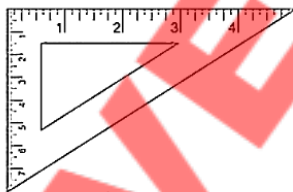
- A. eighty-eight
- B. eighteen
- C. eighty-one

13. The missing number in the number pattern is

11	13	15	17	19		23
-----------	-----------	-----------	-----------	-----------	--	-----------

- A. 20
- B. 21
- C. 22

14. The number of sides of the 2D shape below is



- A. 2
- B. 4
- C. 3

15. The number that comes after 49 is

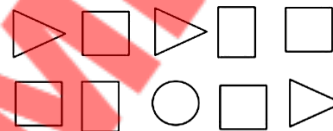
- A. eighty
- B. fifty
- C. sixty

16. What is the value of the coin?



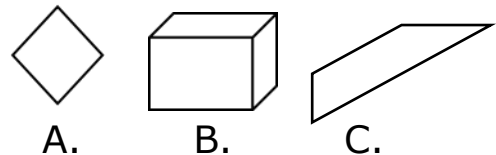
- A. 50 pesewas
- B. 60 pesewas
- C. 70 pesewas

17. Count and select the number of shapes with 4 sides.



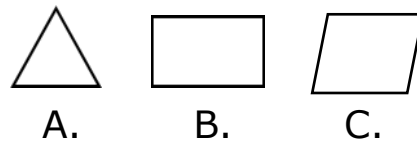
- A. 6
- B. 8
- C. 10

18. Which of these shapes is a 3D shape?



- A.
- B.
- C.

19. The shape of an exercise book is



- A.
- B.
- C.

20. The pattern of numbers shows skipping forward in 5, 10, 15, 20, 25, 30,

- A. 5s
- B. 10s
- C. 15s

SECTION B

[20 MARKS]

Answer **all** questions.

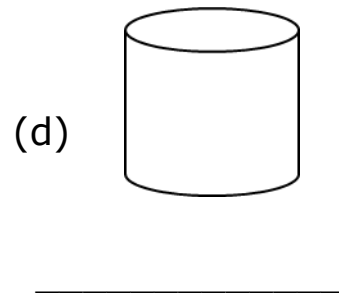

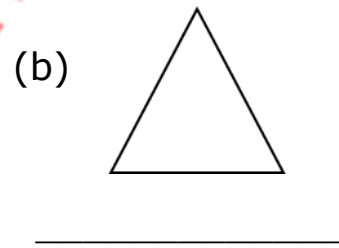
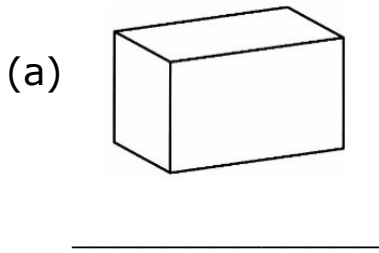
1. Write the numbers in figures.

(a) Forty-eight = _____

(b) Twelve = _____

(c) Thirty-five = _____

2. State whether the shape is a 2D or 3D shape.



3. Write the next number for each pattern.

i. 1, 3, 5, 7, 9,

ii. 2, 4, 6, 8, 10,

iii. 15, 14, 13, 12, 11,

ONE VISION EXAMINATIONS CENTRE (OVEC)



END OF FIRST TERM EXAMINATION - DEC.

SCIENCE

1 hour 40 minutes

BASIC 1

PRINT IN BLOCK LETTERS

Name: _____
Surname Other Names

Date: _____ **Signature:** _____

OBJECTIVE TEST

Answer **all** Questions in this section

- Which part of the human body is used to walk?
A. Nose
B. Leg
C. Mouth
- All the following use air except
A. birds
B. bicycle tyres
C. rice cooker
- A cloud of tiny water droplets suspended in the atmosphere near the earth's surface is called
A. mist
B. water
C. fog
- An example of a natural source of light is
A. wood
B. moon
c. sun
- During the dry season
A. it rains
b. it does not rain
C. plants grow well
- Bridges are made using
A. paper
B. stones
C. glass

7. An example of a solid is
A. milk
B. air
C. wood


8. An example of a liquid is
A. book
B. water
C. pencil

9. How many states of matter do we have?
A. 1
B. 4
C. 3


10. The sun rises in the
A. West
B. North
C. East

1. **State whether the things below are living things or non-living things.**

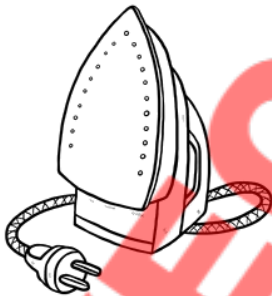
11



12




13





14



15



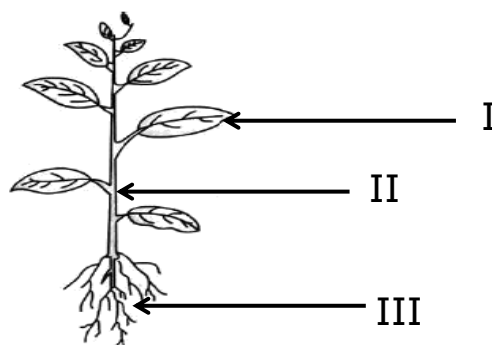
2. Provide the names of the following animals from the list below:
[Lion, Bird, Pig, Sheep, Domestic fowl]



SECTION B

Answer all Questions in this section

1. (a) The diagram below represents a flowering plant. Study it carefully and answer the questions that follow.



i. Name the parts labelled;

I - _____

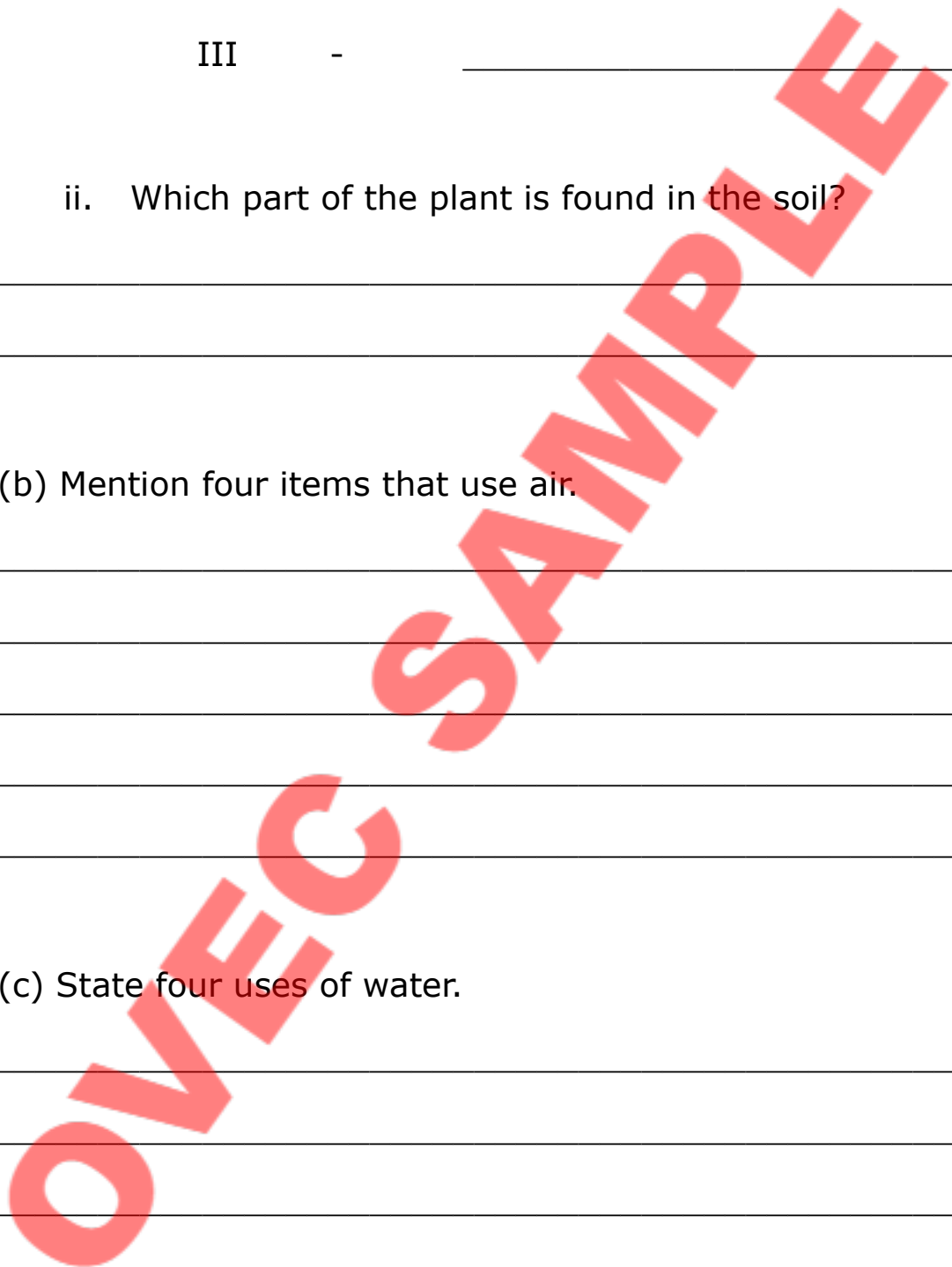
II - _____

III - _____

ii. Which part of the plant is found in the soil?

(b) Mention four items that use air.

(c) State four uses of water.



ONE VISION EXAMINATIONS CENTRE (OVEC)



(A Credible Private Examinations Group)

END OF FIRST TERM EXAMINATION - DEC.

HISTORY

1 hour 40 minutes

NAME OF PUPIL			
SIGNATURE		Question no.	Marks
CLASS	BASIC 1		
INSTRUCTIONS	1. Write your name and indicate your signature in the spaces provided above.		
	2. Answer the questions as stated by the instructions given before each section.		
	3. Your teacher will guide you to understand the questions before you start.		
	TOTAL		

Read each question carefully and choose the correct option from lettered A, B and C.

1. The day Kwame was born is part of

- A. Numbers
- B. English
- C. History

2. Festivals are celebrated to remember

- A. present people
- B. future things
- C. past events

3. Old pictures of Ama show what she looked like when she was

- A. old
- B. young
- C. grown

4. Who can be seen at the palace?

- A. Learner
- B. Teacher
- C. Chief

Use the picture below to answer questions 5 and 6.



5. Where in the community is shown in the picture?

- A. Post office
- B. Hospital
- C. Market

6. What happens at the place?

- A. Treat sick people
- B. Pray to God
- C. Learn how to write

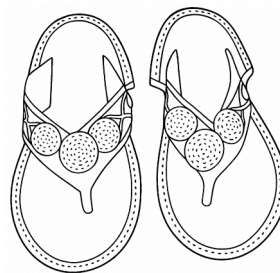
7. Big communities in Ghana have many

- A. sand
- B. people
- C. gods

8. Christians learn the history of Jesus Christ from the

- A. Holy Bible
- B. Holy Qur'an
- C. Holy Story

Use the picture below to answer questions 9 and 10.



9. What is the name of the historical item above?

- A. Sandals
- B. Shoes
- C. Slippers

10. What is the historical item made from?

- A. Rubber
- B. Leather
- C. Wood

11. Which month has not passed in 2025?

- A. November
- B. October
- C. December

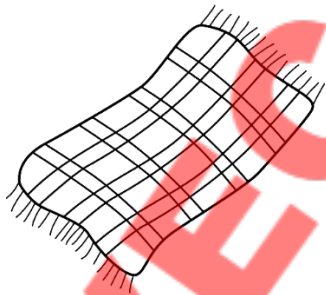
12. People live together in their

- A. buses
- B. schools
- C. communities

13. Children can learn about history from their

- A. younger siblings
- B. grandparents
- C. little friends

Answer questions 14 and 15 using the picture below.



14. Identify the historical item.

- A. Newspaper
- B. Local cloth
- C. Drum skin

15. An example of a historical item is

- A. kente
- B. kete
- C. kafa

16. Ghana was first called

- A. Stone Quarry
- B. Gold Coast
- C. Silver site

17. The way people move their bodies to music tunes shows their

- A. dressing
- B. language
- C. dance

18. When we learn history together, it brings

- A. anger
- B. unity
- C. fight

19. Wetlands in our communities have a lot of

- A. water
- B. stone
- C. leaves

20. Ghana was first named after which of these items?

- A. Water
- B. Gold
- C. Cement

SECTION B

[20 MARKS]

Answer **all** questions.

1. Colour the following historical event and occupation.

(a) Aboakyir festival



(b) Kente weaving



ONE VISION EXAMINATIONS CENTRE (OVEC)



(A Credible Private Examinations Group)

END OF FIRST TERM EXAMINATION - DEC.

RELIGIOUS AND MORAL EDUCATION

1 hour 40 minutes

NAME OF PUPIL			
SIGNATURE		Question no.	Marks
CLASS	BASIC 1		
INSTRUCTIONS	1. Write your name and indicate your signature in the spaces provided above.		
	2. Answer the questions as stated by the instructions given before each section.		
	3. Your teacher will guide you to understand the questions before you start.		
	TOTAL		

Read each question carefully and choose the correct option from lettered A, B and C.

1. Human beings get heat and light from the
- A. rain
 - B. moon
 - C. sun

2. The first people God made are called



- A. Mary and Joseph
- B. Sarah and Abraham
- C. Eve and Adam

3. All power in the Heaven and on Earth belongs to
- A. God
 - B. man
 - C. Angels

4. Traditionalists do their worship acts at
- A. church
 - B. mosque
 - C. shrine

5. Muslims worship Allah through
- A. Jesus Christ
 - B. Okomfo Anokye
 - C. Prophet Muhammed

6. Christians do the following things at church except
- A. singing
 - B. playing
 - C. dancing

7. God is wonderful because He knows
- A. nothing
 - B. everything
 - C. some things

Use the picture below to answer questions 8 and 10.



8. In the picture above, what is the man doing? He is
- A. crying
 - B. praying
 - C. singing

9. Which religion does the man belong to?
- A. Christianity
 - B. Islam
 - C. Traditional

10. The object behind the man is a
- A. cross
 - B. stick
 - C. blade

11. All Traditionalists in Ghana believe in
- A. Jesus
 - B. gods
 - C. Allah
12. The needs of every man include food, water and
- A. air
 - B. sand
 - C. stone
13. Which people call God Mawu?
- A. Ewe
 - B. Bono
 - C. Fante
14. Sharing what you have with others means you are
- A. humble
 - B. caring
 - C. angry
15. Which of these is made from trees?
- A. Foam
 - B. Paper
 - C. Clay
16. The natural object that gives food and wood is
- A. water
 - B. moon
 - C. tree
17. Plants, animals and human beings have
- A. paint
 - B. book
 - C. life
18. The Lord's prayer begins with 'our father who art in
- A. School
 - B. Home
 - C. Heaven
19. How many types of worship do we have in Ghana?
- A. Three
 - B. Two
 - C. Four
20. What do human beings get from water bodies?
- A. Paper
 - B. Fish
 - C. Wood


SECTION B

[20 MARKS]

Answer **all** questions.


1. Write the name of the object and the things we get from it from the list of words.

Light	Goat	Fruit
Sun	Tree	Meat



Name of Object			
Product			

2. Colour the natural object below.



ONE VISION EXAMINATIONS CENTRE (OVEC)



(A Credible Private Examinations Group)

END OF FIRST TERM EXAMINATION - DEC.

COMPUTING


1 hour 40 minutes

NAME OF PUPIL			
SIGNATURE		Question no.	Marks
CLASS	BASIC 1		
INSTRUCTIONS	1. Write your name and indicate your signature in the spaces provided above.		
	2. Answer the questions as stated by the instructions given before each section.		
	3. Your teacher will guide you to understand the questions before you start.		
	TOTAL		

Read each question carefully and choose the correct option from lettered A, B and C.

1. What is information?
A. Listening to music
B. A game we play
C. Something that gives us knowledge

2. Where do we see icons?
A. On top of the screen
B. On the desk
C. On the computer screen

3. A radio helps us to
- 
- A. listen to our teacher
B. talk to friends
C. receive information

4. What is a computer mouse used for?
A. Holding the computer
B. Playing football
C. Moving things on the computer screen

5. How should one hold the computer mouse?
A. With your foot
B. With your hand
C. With your mouth

6. When using the mouse, your hand should be
A. on your head
B. on the mouse
C. behind your back

7. What do we use to select an icon on the desktop?
A. Keyboard
B. Mouse
C. Monitor

8. Icons on the desktop are used to
A. play games only
B. open programs
C. clean the screen

9. What happens when you double click on an icon?
A. It disappears
B. It opens the icon
C. It moves the mouse

10. Which part of the keyboard is used to type letters?
A. The function keys
B. The number pad
C. The alphabet keys

11. Which of these is a letter on the keyboard?

- A. 7
- B. G
- C. @

12. Which of these is a source of information?

- A. Sleeping
- B. Television
- C. Jumping rope

13. We use number keys to type

- A. letters
- B. everything
- C. numbers

14. Which of these is a number key?



- A. M
- B. 3
- C. Q

15. What is an icon?

- A. A type of object
- B. A picture on the desktop
- C. A classroom chair

16. What do we press to type numbers on the keyboard?

- A. Spacebar
- B. Arrow keys
- C. Number keys

17. Which tool can be used to send and receive information?

- A. Radio
- B. Television
- C. Telephone

18. Which of these is not a letter?

- A. E
- B. X
- C. 4

19. How do we take care of the mouse?

- A. Drop it on the floor
- B. Use it gently and keep it clean
- C. Hit it with a book

20. We can get information from

- A. school bell
- B. car horn
- C. radio

SECTION B

[40 MARKS]

Answer **all** questions.

1. Fill in the blanks with the correct answer.

Information, Icons, Double-clicking, Radio, Keyboard

- (a) We use the _____ to type letters.
- (b) We click on _____ to open a program on the desktop.
- (c) _____ is the process of clicking the mouse button twice.
- (d) _____ gives us knowledge or helps us learn something new.
- (e) An example of sources of information is _____

[20 marks]

2. Match the following ICT tools to their right names.



Mouse




Monitor



Keyboard



Radio



System unit

[20 marks]

ONE VISION EXAMINATIONS CENTRE (OVEC)



(A Credible Private Examinations Group)

END OF FIRST TERM EXAMINATION - DEC.

CREATIVE ARTS

1 hour 40 minutes

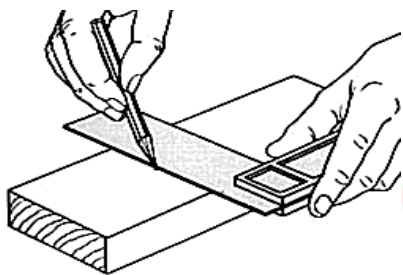
NAME OF PUPIL			
SIGNATURE		Question no.	Marks
CLASS	BASIC 1		
INSTRUCTIONS	1. Write your name and indicate your signature in the spaces provided above.		
	2. Answer the questions as stated by the instructions given before each section.		
	3. Your teacher will guide you to understand the questions before you start.		
	TOTAL		

Read each question carefully and choose the correct option from lettered A, B and C.

1. Willie wants to play the drums. What would he use?
A. Sticks
B. Stones
C. Scissors

2. Which of these natural forms has a blue colour?
A. Plants
B. Sky
C. Teeth

Use the picture below to answer questions 3 and 4.



3. Which activity does the picture show?
A. Writing words
B. Painting pictures
C. Drawing line
4. What is the name of the tool being used for the activity?
A. Ink
B. Brush
C. Pencil
5. When music is played at funerals, people
A. laugh
B. draw
C. dance

6. Which object becomes big when air is blown into it?
A. Drum
B. Balloon
C. Clothes

7. Visual art works like balls, are used to
A. play
B. read
C. shout

Use the picture below to answer questions 8 and 9.



8. The picture shows a happy
A. dancer
B. singer
C. writer
9. What tool or device is the boy holding?
A. Guitar
B. Microphone
C. Paper sold
10. Homowo, Adaye and Damba are examples of Ghanaian
A. languages
B. festivals
C. names

11. A girl is making a paper table. What can she use to cut paper?

- A. Pin
- B. Needle
- C. Scissors

12. The main food of the Asante people is

- A. rice
- B. fufu
- C. yam

13. What can be used to clean pencil marks on paper?

- A. Blade
- B. Eraser
- C. Phone

14. The picture below shows a



- A. teacher
- B. chief
- C. pastor

15. What do ethnic groups show during festivals?

- A. Houses
- B. Words
- C. Culture

Use the picture below to answer questions 16 and 17.



16. The visual art tools are pencils and

- A. brushes
- B. straws
- C. chalks

17. The tools in the picture can be used for

- A. dancing
- B. painting
- C. singing

18. Which artwork makes musical sound?

- A. Basket
- B. Sandals
- C. Drums

19. Children sing the National Anthem at school during

- A. break
- B. assembly
- C. lessons

20. In exercise books, children use crayons for

- A. colouring
- B. cutting
- C. erasing

SECTION B

[20 MARKS]

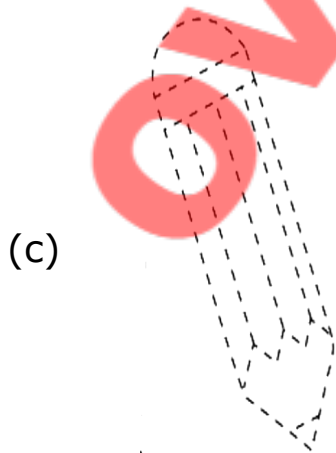

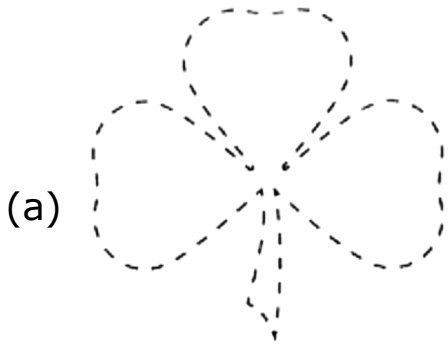
Answer **all** questions.

1. Trace and colour the following items and write their names under each of them.

Umbrella

Pencil

Flower



ONE VISION EXAMINATIONS CENTRE (OVEC)



(A Credible Private Examinations Group)

END OF FIRST TERM EXAMINATION - DEC.

**GHANAIAN LANGUAGE
(ASANTE TWI)**

1 hour 40 minutes

NAME OF PUPIL			
SIGNATURE		Question no.	Marks
CLASS	BASIC 1		
INSTRUCTIONS	1. Write your name and indicate your signature in the spaces provided above.		
	2. Answer the questions as stated by the instructions given before each section.		
	3. Your teacher will guide you to understand the questions before you start.		
	TOTAL		

Kenkan dwom tiawa yi na bua
Nsɛmmisa 1 – 5.

Magye m'asɔ, magye m'asɔ
Magye me tuo, magye me tuo ee
Nantwinam ba ee, twintwann
Kontommire ba ee, hontonn
Nantwie su muu, muu
Ɔkraman pɔ wo, wo
Odwan su mmɛɛ, mmɛɛ


1. Dwom bɛn nie?
A. Ɔko dwom
B. Abagyegyɛɛ dwom
2. Aboa a ɔsu muu, muu yɛ
.....
A. Nantwie
B. Odwan
3. Aboa a ɔpɔ wo, wo yɛ
.....
A. Ɔkraman
B. Apɔnkɛ
4. Atosodɛɛ yi mu baako yɛ
hontonn.
A. Gyeene
B. Kontommire

5. Aboa a ɔsu mmɛɛ, mmɛɛ yɛ
.....

- A. Akokɔ
- B. Odwan


**Kyerɛ mfonin yi din wɔ Twi
kasa mu.**

6.



- A. Akuma
- B. Apasɔɔ

7.




- A. Etuo
- B. Etire

8.



- A. Kuruwa
- B. Kɛtɛ

9.



- A. Ɔpɛtɛ
- B. Ɔpɔnkɔ

10.



- A. Safoa
- B. Samina

11. Anansesem wo nkyekyemu

.....

- A. mmiensa
- B. enan

12. Tete no, na yefre anansesem

- A. Agoranssem
- B. Nyankonssem

13. Ananse yewo anansesem mu.

- A. osisifo
- B. ahobrasee

14. Wo anansesem mu no, adanko ye

- A. okoromfo
- B. ohofefo

15. Anansesem ho mfaso ne se

- A. ema yeka nokore
- B. ema yeko ntakwa

16. Okwan a atwerfo da n'adwene adi wo agodie kwan so no, yefre no

.....

- A. anwonssem
- B. ahwegoro

17. Nnipa a wohwe ahwegoro no yefre won

- A. atwerfo
- B. behwadeefo

18. Ahwegoro a eye awereho no, din de

- A. tragyedi
- B. komedi

19. Yefre nnipa a woye ahwegoro se

- A. ayefo
- B. behwadeefo

20. Ahwegoro wie anigye a, yefre no

- A. komedi
- B. tragyedi

SECTION B

[40 MARKS]

*Bua nsemmissa a εωϝ ϝfa ha no **nyinaa**.*

1. *Sensane **adeyϝ** a εωϝ ϝkasamu yi mu nyinaa.*

- (a) Ama kϝ nsuo dabiara.
- (b) Akwasi papa da dan no mu.
- (c) Drϝbani no twi lϝre ntentem.
- (d) ϝkyerεkyerεni no kasa dodo.
- (e) Maame no pam adeε.

2. *Sensane **edin nkyerεkyerεmu** a εωϝ ϝkasamu yi mu.*

- (a) Aduro no yε nwonο.
- (b) Nkosua bebree wϝ mukaase hϝ
- (c) ϝkraman tuntum no ayera.
- (d) Akosua kura paano kεseε.
- (e) Yεwϝ lϝre fitaa wϝ fie.

ONE VISION EXAMINATIONS CENTRE (OVEC)



(A Credible Private Examinations Group)

END OF FIRST TERM EXAMINATION - DEC.

FRENCH LANGUAGE

1 hour 40 minutes

NAME OF PUPIL			
SIGNATURE		Question no.	Marks
CLASS	BASIC 1		
INSTRUCTIONS	1. Write your name and indicate your signature in the spaces provided above.		
	2. Answer the questions as stated by the instructions given before each section.		
	3. Your teacher will guide you to understand the questions before you start.		
	TOTAL		

SECTION A

[60 MARKS]


Identify the images below and write their names in French.

1.



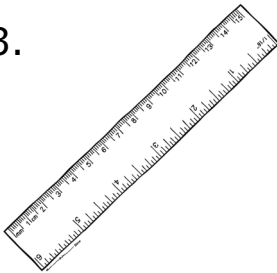
- A. Un crayon
- B. Un stylo

2.




- A. Un crayon
- B. Un stylo

3.



- A. Un tableau
- B. Une règle

4.




- A. Un tableau
- B. Une règle

5.



- A. Un cahier
- B. Un livre

6.




- A. Un cahier
- B. Un livre

7.




- A. Une craie
- B. Une classe

8.



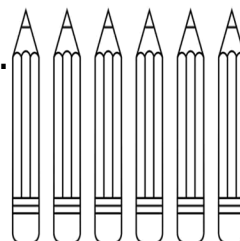
- A. Un chien
- B. Un lion

9.



- A. Une classe
- B. Un professeur

10.



- A. Cinq crayons
- B. Six crayons

Choose the correct greetings in French to complete the sentences below.

11. Bonjour, Kwame!

- A. Bonjour, Ama!
- B. Bonsoir, Ama!

12. Comment ça va?

- A. Ça va mal.
- B. Ça va bien.

13. Au revoir, Kassa!

- A. Au revoir, Kofi.
- B. Bonjour, Kofi.

14. Mon est Adjei Bright.

- A. nom
- B. prénom

15. Mon est Bright.

- A. nom
- B. prénom

16. Je appelle Fathan Kassa.

- A. m'
- B. s'

17. J'ai ans.

- A. six
- B. jeudi

18. Voici élèves.

- A. les
- B. l'

19. Mon père s'appelle

- A. Madame Janet
- B. Monsieur Mahama

20. mère est très belle.

- A. Ma
- B. Mon

SECTION B

[40 MARKS]

Answer **all** questions.

1. **Complete the sentences below by providing the correct answers.**

(a) Je m'appelle _____

(b) Mon professeur s'appelle _____

(c) Mon école s'appelle _____

(d) Ma mère s'appelle _____

(e) Mon ami(e) s'appelle _____

(f) Mon directeur s'appelle _____

(g) Mon école s'appelle _____

(h) Mon grand-père s'appelle _____

(i) Ma grand-mère s'appelle _____

(j) Ma soeur s'appelle _____